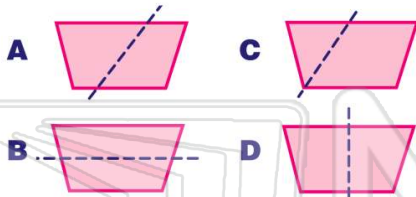


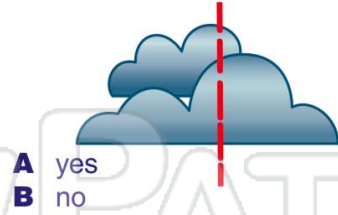


Name _____ Class _____ Date _____

1 Which one shows **symmetry**?



2 Is this **symmetrical**?



3 Which one shows **symmetry**?



4 Which one shows **symmetry**?



5



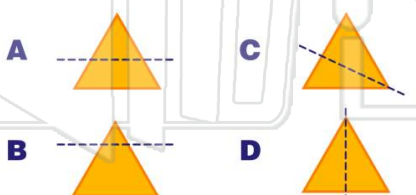
PREVIEW

Please [Sign In](#) or [Sign Up](#) to download the printable version of this worksheet


7



9 Which one shows **symmetry**?



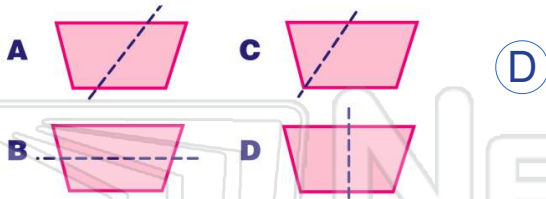
10 **No symmetry.**



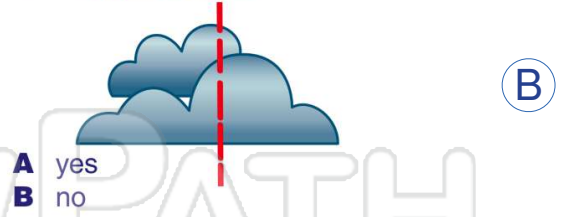


Name _____ Class _____ Date _____

1 Which one shows **symmetry**?



2 Is this **symmetrical**?



3 Which one shows **symmetry**?



4 Which one shows **symmetry**?

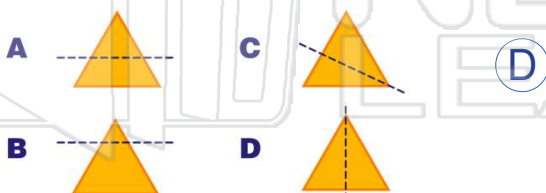


PREVIEW

Please [Sign In](#) or [Sign Up](#) to download the printable version of this worksheet



9 Which one shows **symmetry**?



10 **No symmetry.**

