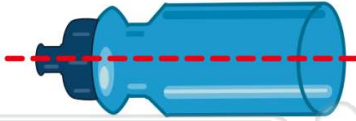




Name _____ Class _____ Date _____

1 Does this have **symmetry**?



(A)

- A yes
- B no

2 Does this have **symmetry**?



(A)

- A yes
- B no

3 Which one shows **symmetry**?



(A)

4 Which one shows **symmetry**?



(B)

5



(A)

PREVIEW

Please [Sign In](#) or [Sign Up](#) to download the printable version of this worksheet

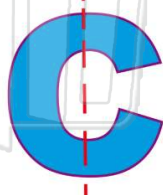
7



- A yes
- B no

(A)

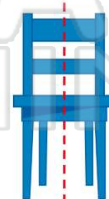
9 Does this show **symmetry**?



(B)

- A yes
- B no

10 Does this show **symmetry**?



(A)

- A yes
- B no