



Name _____

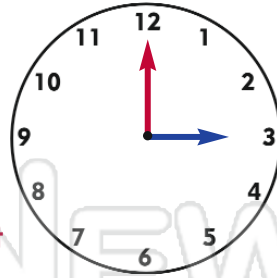
Date _____

Time

What time is it?

The long hand is pointing to 12.
It is an o'clock time.

The short hand tells us which hour it is. It is pointing to 3.



It is 3 o'clock



Draw lines to match each clock with the correct time.

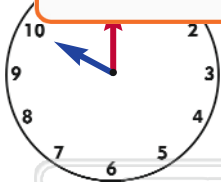


9 o'clock

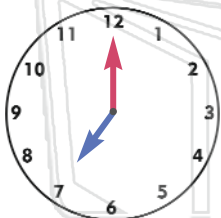
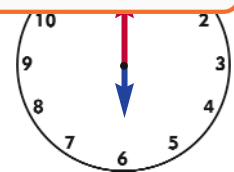


PREVIEW

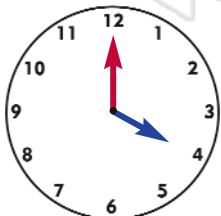
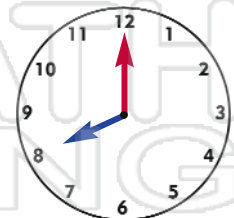
Please [Sign In](#) or [Sign Up](#) to download the printable version of this worksheet



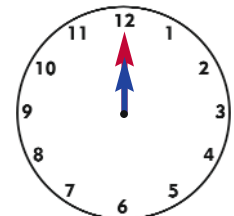
6 o'clock



10 o'clock



8 o'clock



7 o'clock

12 o'clock



Name _____

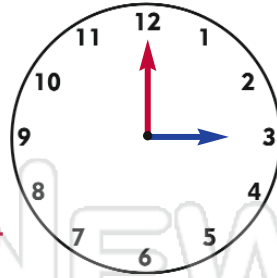
Date _____

Time

What time is it?

The long hand is pointing to 12.
It is an o'clock time.

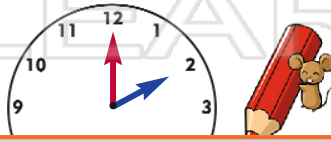
The short hand tells us which hour it is. It is pointing to 3.



It is 3 o'clock



Draw lines to match each clock with the correct time.

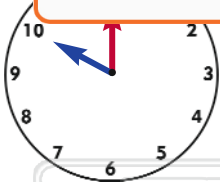


9 o'clock

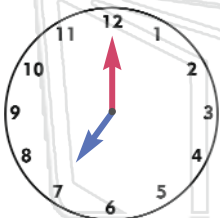
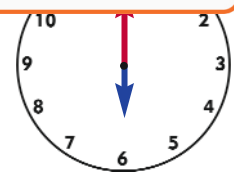


PREVIEW

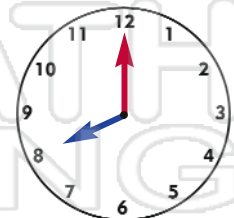
Please [Sign In](#) or [Sign Up](#) to download the printable version of this worksheet



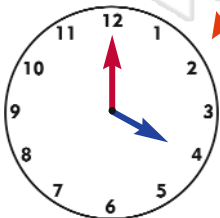
6 o'clock



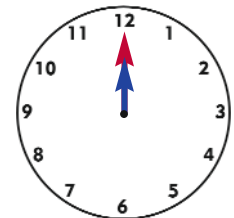
10 o'clock



8 o'clock



7 o'clock



12 o'clock