



Name _____

Date _____

Time

Both clocks show that it is 3 o'clock.

analog
clock



digital
clock

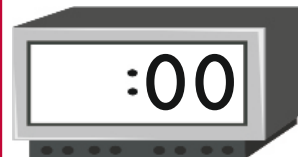
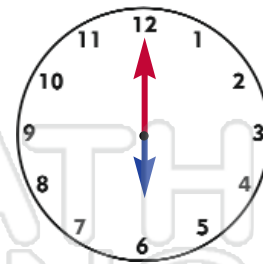
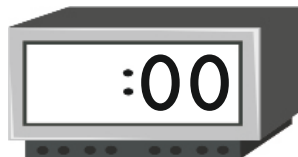
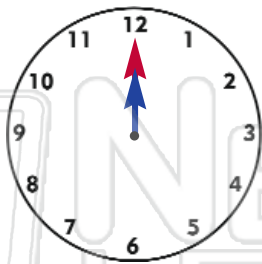
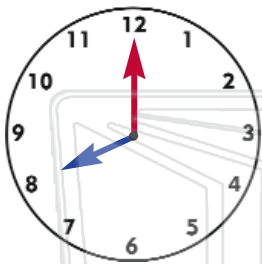


Write on clock show time and



PREVIEW

Please [Sign In](#) or [Sign Up](#) to download the printable version of this worksheet





Name _____

Date _____

Time _____

Both clocks show that it is 3 o'clock.

analog
clock



digital
clock

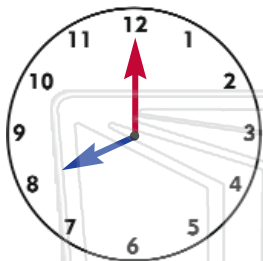


Write on clock show time and

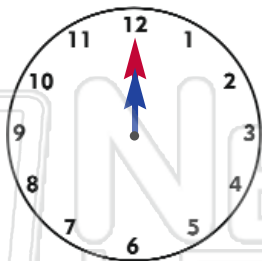


PREVIEW

Please [Sign In](#) or [Sign Up](#) to download the printable version of this worksheet



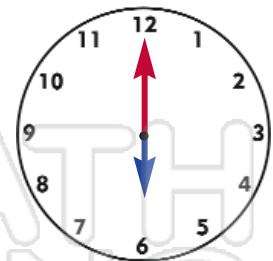
8:00



12:00



2:00



6:00