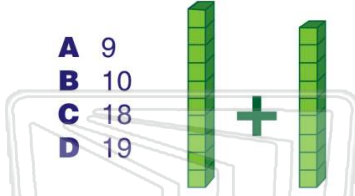




Name _____ Class _____ Date _____

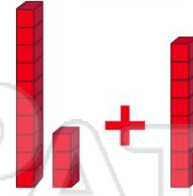
1 $10 + 9 = \underline{\quad}$

- A 9
- B 10
- C 18
- D 19



2 $13 + 8 = \underline{\quad}$

- A 19
- B 20
- C 21
- D 22



3 $17 + 7 = \underline{\quad}$

- A 14



4 $6 + 42 = \underline{\quad}$

- A 48



PREVIEW

Please [Sign In](#) or [Sign Up](#) to download the printable version of this worksheet

7

B $\begin{array}{r|l} \text{TENS} & \text{ONES} \\ \hline 1 & 7 \\ + & 9 \\ \hline & \end{array}$

D $\begin{array}{r|l} \text{TENS} & \text{ONES} \\ \hline 1 & 6 \\ + & 9 \\ \hline & \end{array}$

- C $25 + 6 = 29$
- D $25 + 6 = 32$



9 Which sum is 50?

A $\begin{array}{r|l} \text{TENS} & \text{ONES} \\ \hline 2 & 4 \\ + & 2 & 4 \\ \hline & \end{array}$


B $\begin{array}{r|l} \text{TENS} & \text{ONES} \\ \hline 2 & 3 \\ + & 2 & 3 \\ \hline & \end{array}$

C $\begin{array}{r|l} \text{TENS} & \text{ONES} \\ \hline 2 & 6 \\ + & 2 & 6 \\ \hline & \end{array}$

D $\begin{array}{r|l} \text{TENS} & \text{ONES} \\ \hline 2 & 5 \\ + & 2 & 5 \\ \hline & \end{array}$

10 $25 - 23 = \underline{\quad}$

- A 3
- B 4
- C 2
- D 5

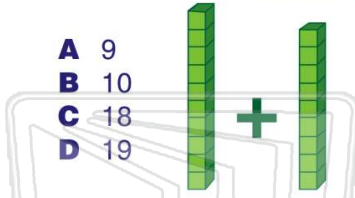




Name _____ Class _____ Date _____

1 $10 + 9 = \underline{\hspace{2cm}}$

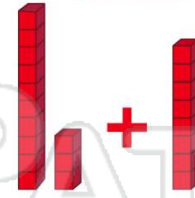
- A 9
- B 10
- C 18
- D 19



(D)

2 $13 + 8 = \underline{\hspace{2cm}}$

- A 19
- B 20
- C 21
- D 22



(C)

3 $17 + 7 = \underline{\hspace{2cm}}$

- A 14



(B)

4 $6 + 42 = \underline{\hspace{2cm}}$

- A 48



(A)



(C)

PREVIEW

Please [Sign In](#) or [Sign Up](#) to download the printable version of this worksheet

7

B

TENS	ONES
1	7
+	9

D

TENS	ONES
1	6
+	9

- C $25 + 6 = 29$
- D $25 + 6 = 32$



(B)

9 Which sum is 50?

A

TENS	ONES	
2	4	
+	2	4

C

TENS	ONES	
2	6	
+	2	6

B

TENS	ONES	
2	3	
+	2	3


D

TENS	ONES	
2	5	
+	2	5

(D)

10 $25 - 23 = \underline{\hspace{2cm}}$

- A 3
- B 4
- C 2
- D 5



(C)