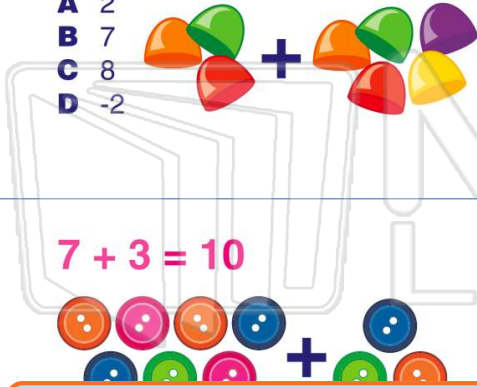




Name _____ Class _____ Date _____

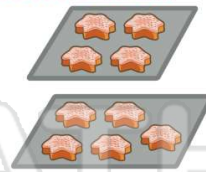
1 $3 + 5 = \square$

- A 2
- B 7
- C 8
- D -2



2 There are 5 cookies on a large tray and 4 cookies on a small tray. How many cookies are there in all?

- A 9 cookies
- B 1 cookie
- C 8 cookies
- D 10 cookies



3 $7 + 3 = 10$



4 There are 8 frogs in a pond. Two more jump in the pond. How many frogs are in the pond now?



5



PREVIEW

Please [Sign In](#) or [Sign Up](#) to download the printable version of this worksheet

7

- A 12
- B 1
- C 11
- D 13




9 Anna has 8 goldfish in a tank. She adds 7 more to the tank. How many goldfish are in the tank?

- A 1
- B 15
- C 14
- D 56



10 Jada has 6 apples. How many more does she need to have 10 apples?





Name _____ Class _____ Date _____

1 $3 + 5 = \square$

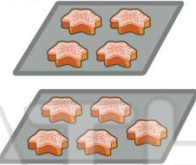
- A 2
- B 7
- C 8
- D -2



(C)

2 There are 5 cookies on a large tray and 4 cookies on a small tray. How many cookies are there in all?

- A 9 cookies
- B 1 cookie
- C 8 cookies
- D 10 cookies



(A)

3 $7 + 3 = 10$



(A)

4 There are 8 frogs in a pond. Two more jump in the pond. How many frogs are in the pond now?



(D)

5



(C)

PREVIEW

Please [Sign In](#) or [Sign Up](#) to download the printable version of this worksheet

7

- A 12
- B 1
- C 11
- D 13



(D)


9 Anna has 8 goldfish in a tank. She adds 7 more to the tank. How many goldfish are in the tank?

- A 1
- B 15
- C 14
- D 56



(B)

10 Jada has 6 apples. How many more does she need to have 10 apples?



(C)