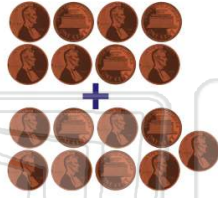





Name _____ Class _____ Date _____

1 Jon has 9 cents. He finds 8 more cents. He now has 18 cents.

- A true
- B false



2 I have 11 pencils. I buy 8 more. How many pencils do I have?



- A 18
- B 10
- C 19
- D 3

3 Jose has 7 cards. Nora gives him 9 more. How many cards does Jose have now?



4 $3 + 9 = \square$

- A 21
 - B 6
- 

5



PREVIEW

Please [Sign In](#) or [Sign Up](#) to download the printable version of this worksheet

7

- A 8
- B 17

C	16	+	3	
D	11		?	

- A true
- B false

9

Lin has 13 marbles. She wants to have 18 marbles. How many more marbles does Lin need?

- A 13 more
- B 18 more
- C 5 more
- D 8 more

	tens	ones
	1	3
+	?	?
	1	8

10

There are 11 birds on a fence. If nine more land on the fence how many birds will be on the fence?

- A 21
- B 20
- C 2
- D 19

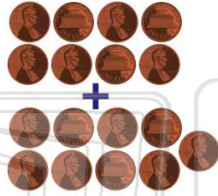




Name _____ Class _____ Date _____


1 Jon has 9 cents. He finds 8 more cents. He now has 18 cents.

- A true
- B false



(B)

2 I have 11 pencils. I buy 8 more. How many pencils do I have?



- A 18
- B 10
- C 19
- D 3

(C)

3 Jose has 7 cards. Nora gives him 9 more. How many cards does Jose have now?



(C)

4 $3 + 9 = \square$

- A 21
- B 6



(D)

5



(C)

PREVIEW

Please [Sign In](#) or [Sign Up](#) to download the printable version of this worksheet

7

- A 8
- B 17
- C 16
- D 11



- A true
- B false

(B)

9 Lin has 13 marbles. She wants to have 18 marbles. How many more marbles does Lin need?

- A 13 more
- B 18 more
- C 5 more
- D 8 more

	tens	ones
	1	3
+	?	?
	1	8

(C)

10 There are 11 birds on a fence. If nine more land on the fence how many birds will be on the fence?

- A 21
- B 20
- C 2
- D 19



(B)