



Name _____ Class _____ Date _____

1 Rosa read 13 books. She reads 7 more. Has she read 20 books?

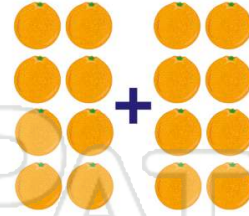
- A yes
- B no



tens	ones
1	3
2	0

2 What is double 8?

- A 14
- B 18
- C 15
- D 16



3 Start at 7. Add 5 more. Add 3 more. Add 2 more. What number are you on?

Start at 7

4 $8 + 3 + 2 = 13$



5



PREVIEW

Please [Sign In](#) or [Sign Up](#) to download the printable version of this worksheet

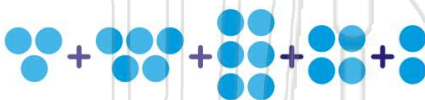
7

- A true
- B false

- A yes
- B no



9 $3 + 5 + 6 + 4 + 2 = \square$



- A 21
- B 16
- C 18
- D 20

10 Hong caught 9 fish. Chen caught 4 fish. Mina caught 5 fish. Ling caught 1 fish. How many fish did they catch in all?

- A 9 fish
- B 14 fish
- C 19 fish
- D 15 fish





Name _____ Class _____ Date _____

1 Rosa read 13 books. She reads 7 more. Has she read 20 books?

- A yes
- B no

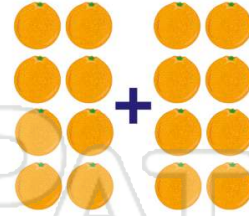


tens	ones
1	3
2	0

(A)

2 What is double 8?

- A 14
- B 18
- C 15
- D 16



(D)

3 Start at 7. Add 5 more. Add 3 more. Add 2 more. What number are you on?

Start at 7

(B)

4 $8 + 3 + 2 = 13$



(A)

5



(D)

PREVIEW

Please [Sign In](#) or [Sign Up](#) to download the printable version of this worksheet

7

- A true
- B false

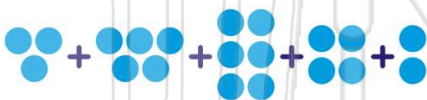
- A yes
- B no



(B)

9

$3 + 5 + 6 + 4 + 2 = \square$



(D)

- A 21
- B 16
- C 18
- D 20

10

Hong caught 9 fish. Chen caught 4 fish. Mina caught 5 fish. Ling caught 1 fish. How many fish did they catch in all?

- A 9 fish
- B 14 fish
- C 19 fish
- D 15 fish



(C)