



Name \_\_\_\_\_

Date \_\_\_\_\_

Choose the best times to finish these sentences.  
Color each digital time as you use it.

- |                                     |       |       |
|-------------------------------------|-------|-------|
| Rob gets up at                      | _____ | 9:00  |
| He has his breakfast at             | _____ | 12:30 |
| He catches the school bus at        | _____ | 3:00  |
| School starts at                    | _____ | 7:30  |
| Lunch is at                         | _____ | 3:30  |
| Recess is after lunch. It starts at | _____ | 7:00  |
| School ends at                      | _____ | 1:30  |
| Rob gets home at                    | _____ | 8:00  |

Look at these digital clocks:


What does the 8 mean? \_\_\_\_\_





## PREVIEW

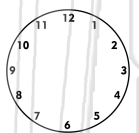
Please [Sign In](#) or [Sign Up](#) to download the printable version of this worksheet



half past 7



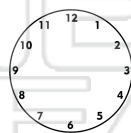
nine thirty



9 o'clock



10 o'clock



half past five



half past 3



2 thirty



12 o'clock



Show the time on the clocks.



Name \_\_\_\_\_

Choose the best times to finish these sentences.  
Color each digital time as you use it.

- |                                     |              |       |
|-------------------------------------|--------------|-------|
| Rob gets up at                      | <u>7:00</u>  | 9:00  |
| He has his breakfast at             | <u>7:30</u>  | 12:30 |
| He catches the school bus at        | <u>8:00</u>  | 3:00  |
| School starts at                    | <u>9:00</u>  | 7:30  |
| Lunch is at                         | <u>12:30</u> | 3:30  |
| Recess is after lunch. It starts at | <u>1:30</u>  | 7:00  |
| School ends at                      | <u>3:00</u>  | 1:30  |
| Rob gets home at                    | <u>3:30</u>  | 8:00  |

Look at these digital clocks:

What does the 8 mean? hours

**PREVIEW**

Please [Sign In](#) or [Sign Up](#) to download the printable version of this worksheet

seven o'clock	half past nine	two o'clock	half past six	
half past 7	9 o'clock	half past five	2 thirty	
nine thirty	10 o'clock	half past 3	12 o'clock	