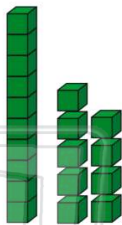




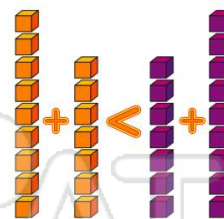
Name _____ Class _____ Date _____

1 19 is the **same as 1 ten and 9 ones.**

- A** true
B false

**2** $9 + 7 < 7 + 9$

- A** true
B false

**3** $15 - 3 > 14 - 2$

- A** true
B false

**4** Which is **greater than** $57 + 3$?

- A** $3 + 57$
B $56 + 4$

**5**

PREVIEW

Please [Sign In](#) or [Sign Up](#) to download the printable version of this worksheet

7

- A** yes
B no

**B****9**

Yoshi's cat is **32 pounds**. Jim's cat is **37 pounds**. Which cat weighs less?

- A** Yoshi's cat
B Jim's cat

**10** $74 + 10 = 94 - 10$

- A** true
B false





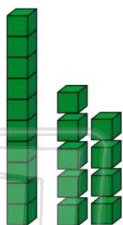
Comparing Numbers

Math

Name _____ Class _____ Date _____

1 19 is the same as 1 ten and 9 ones.

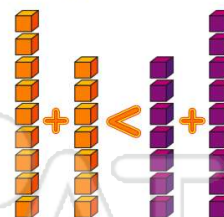
- A true
B false



A

2 $9 + 7 < 7 + 9$

- A true
B false



B

3 $15 - 3 > 14 - 2$

- A true
B false



B

4 Which is greater than $57 + 3$?

- A $3 + 57$
B $56 + 4$



D

5



B

PREVIEW

Please [Sign In](#) or [Sign Up](#) to download the printable version of this worksheet

7

- A yes
B no



B



A

9

Yoshi's cat is 32 pounds. Jim's cat is 37 pounds. Which cat weighs less?

- A Yoshi's cat
B Jim's cat



A

10

$74 + 10 = 94 - 10$

- A true
B false



A