



Name _____ Class _____ Date _____

1 Which is **longest**?

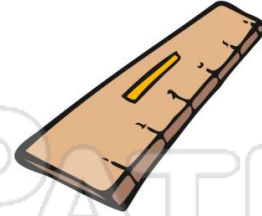
- A motorcycle
- B car
- C bike
- D school bus

Longest!
Longest!



2 Which is **longer**: 1 foot or 1 yard?

- A foot
- B yard



3 Which is **shorter**: an inch or a foot?

- A inch



4 Which weighs **more**: a 5 pound bag of sugar or a 10 pound sack of potatoes?

- A 5 pound bag



5



PREVIEW

Please [Sign In](#) or [Sign Up](#) to download the printable version of this worksheet

7

- C pint
- D gallon



- B length of a driveway



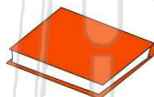
9 Which weighs **least**?

- A bicycle

B



C



D



10 Which is **tallest**?

- A door
- B table
- C house
- D window





Name _____ Class _____ Date _____

1 Which is **longest**?

- A motorcycle
- B car
- C bike
- D school bus

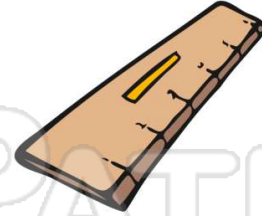
Longest!
Longest!



D

2 Which is **longer**: 1 foot or 1 yard?

- A foot
- B yard



B

3 Which is **shorter**: an inch or a foot?

- A inch



A

4 Which weighs **more**: a 5 pound bag of sugar or a 10 pound sack of potatoes?

- A 5 pound bag



B

5



C

PREVIEW

Please [Sign In](#) or [Sign Up](#) to download the printable version of this worksheet

7

- C pint
- D gallon



A

- B length of a driveway



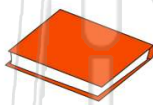
A

9 Which weighs **least**?

- A bicycle



- C book



B

- B pen



- D chair



10 Which is **tallest**?

- A door
- B table
- C house
- D window



C