



Double Digit Addition without Regrouping

Math

Name _____ Class _____ Date _____

1

tens	ones
4	9
+	1
?	?

- A 40 C 50
B 59 D 95

2

Jake has 30 cents. He earns 45 cents. How much money does he have now?

- A 75 cents
B 15 cents
C 48 cents
D 70 cents



3

Chris had 24 marbles. He bought 13 more. How many marbles does Chris have in all?

A 36 marbles



tens	ones
2	4

4

On Saturday there was a race. There were 15 adults and 44 children in the race. How many people were in the race?

5

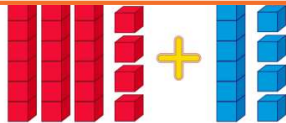


PREVIEW

Please [Sign In](#) or [Sign Up](#) to download the printable version of this worksheet

7

- C 21
D 13



- A true B false

9

Robert collects coins. He has 58 coins. His mom gave him 11 more. How many coins are in his collection?

- A 69 coins
B 68 coins
C 47 coins
D 96 coins

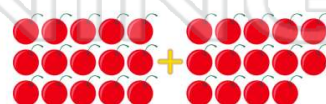
tens	ones
5	8
+	1
	1



10

Shaza ate 15 cherries for breakfast. At snack she ate 14 more cherries. Did Shaza eat more or less than 30 cherries?

- A more
B less





Double Digit Addition without Regrouping

Math

Name _____ Class _____ Date _____

1

tens	ones
4	9
+	1
?	?

- A 40 C 50
B 59 D 95

(B)

2

Jake has 30 cents. He earns 45 cents. How much money does he have now?

- A 75 cents
B 15 cents
C 48 cents
D 70 cents



(A)

3

Chris had 24 marbles. He bought 13 more. How many marbles does Chris have in all?

A 36 marbles



tens	ones
2	4

(C)

4

On Saturday there was a race. There were 15 adults and 44 children in the race. How many people were in the race?

(D)

5



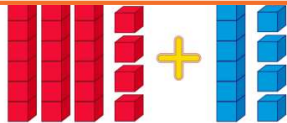
(D)

PREVIEW

Please [Sign In](#) or [Sign Up](#) to download the printable version of this worksheet

7

- C 21
D 13



- A true B false

(B)

9

Robert collects coins. He has 58 coins. His mom gave him 11 more. How many coins are in his collection?

- A 69 coins
B 68 coins
C 47 coins
D 96 coins

tens	ones
5	8
+	1
	1

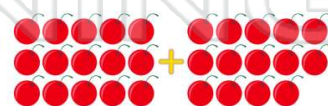


(A)

10

Shaza ate 15 cherries for breakfast. At snack she ate 14 more cherries. Did Shaza eat more or less than 30 cherries?

- A more
B less



(B)