



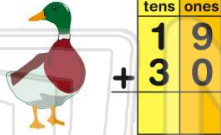
Double Digit Addition without Regrouping

Math

Name _____ Class _____ Date _____


- 1 Sue counted 19 ducks at the pond in the morning. She counted 30 ducks in the pond after lunch. How many ducks did Sue count that day?

- A 39 ducks
B 29 ducks
C 30 ducks
D 49 ducks



- 2 Ice cream bars cost 35¢. Popsicles cost 40¢. How much does it cost to buy one ice cream bar and one popsicle?

- A 35¢
B 45¢
C 75¢
D 70¢



3 $81 + 16 =$

- A 79
B 77



- 4 Mrs. Carter's class has 35 students. Mr. Soto's class has 23 students. There are _____ students in both classes combined.



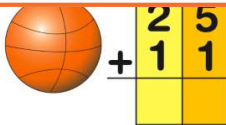
PREVIEW

Please [Sign In](#) or [Sign Up](#) to download the printable version of this worksheet

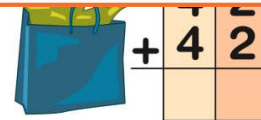
7

- A 48
B 37

- C 23
D 36



- A 48 miles
B 42 miles
C 84 miles
D 6 miles



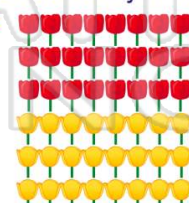
- 9 Jill's mom made 48 cookies on Monday. She made 20 more on Tuesday. Jill took all the cookies to school. Jill took 68 cookies to school.

- A true
B false



- 10 Mark plants 48 tulips. He planted 24 red tulips. The rest are yellow. How many tulips are yellow?

- A 23 tulips
B 20 tulips
C 24 tulips
D 48 tulips





Double Digit Addition without Regrouping

Math

Name _____ Class _____ Date _____

- 1 Sue counted 19 ducks at the pond in the morning. She counted 30 ducks in the pond after lunch. How many ducks did Sue count that day?

A 39 ducks
B 29 ducks
C 30 ducks
D 49 ducks



tens	ones
1	9
3	0

D

- 2 Ice cream bars cost 35¢. Popsicles cost 40¢. How much does it cost to buy one ice cream bar and one popsicle?

A 35¢
B 45¢
C 75¢
D 70¢



$$\begin{array}{r} 35¢ \\ + 40¢ \\ \hline \end{array}$$

C

3 $81 + 16 =$

A 79
B 77



C

- 4 Mrs. Carter's class has 35 students. Mr. Soto's class has 23 students. There are _____ students in both classes combined.

tens	ones

D

5



B

PREVIEW

Please [Sign In](#) or [Sign Up](#) to download the printable version of this worksheet

7

A 48
B 37

C 23
D 36



2	5
1	1

A 48 miles
B 42 miles
C 84 miles
D 6 miles



4	2
---	---

C

9

Jill's mom made 48 cookies on Monday. She made 20 more on Tuesday. Jill took all the cookies to school. Jill took 68 cookies to school.

A true
B false



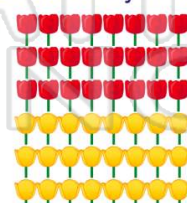
tens	ones
4	8
2	0
6	8

A

10

Mark plants 48 tulips. He planted 24 red tulips. The rest are yellow. How many tulips are yellow?

A 23 tulips
B 20 tulips
C 24 tulips
D 48 tulips



C