



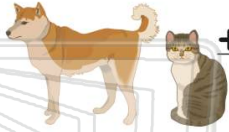
Double Digit Addition without Regrouping

Math

Name _____ Class _____ Date _____

- 1 Maria's cat is 18 pounds. Her dog is 31 pounds. **Together** they weigh _____ pounds.


A 27
B 40
C 13
D 49



tens	ones
1	8
3	1

- 2 Mark's dog eats 20 pounds of dog food in a month. Mark's dog eats 100 pounds of food in 4 months.

A true
B false



- 3 Alexis made 12 chocolate cupcakes and 26 vanilla cupcakes for her class. She made _____ cupcakes.

A 38

tens	ones
1	2
2	6

- 4 The class needs to read 50 books. They read 34 books in September and 24 books in October. Have they read at least 50 books?

tens	ones
3	4
2	4

5



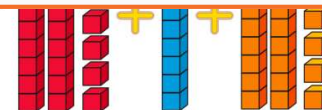
PREVIEW

Please [Sign In](#) or [Sign Up](#) to download the printable version of this worksheet

7



A 36 C 67
B 13 D 76



- 9 Andrew buys pizza for 76 cents. Lemonade costs 20 cents. He only has \$1.00. Does he have enough for the lemonade?

A yes
B no

76¢
+ 20¢



- 10 Jenn built a tower with 62 blocks. Hector came and added 24 more blocks to the tower. How many blocks are in the tower?

A 66 C 86
B 46 D 42

tens	ones
6	2
2	4



Double Digit Addition without Regrouping

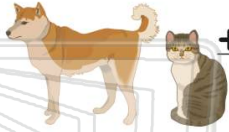
Math

Name _____ Class _____ Date _____

1

Maria's cat is 18 pounds. Her dog is 31 pounds. **Together** they weigh _____ pounds.

- A 27
- B 40
- C 13
- D 49



tens	ones
1	8
3	1

(D)

2

Mark's dog eats 20 pounds of dog food in a month. Mark's dog eats 100 pounds of food in 4 months.

- A true
- B false



(B)

3

Alexis made 12 chocolate cupcakes and 26 vanilla cupcakes for her class. She made _____ cupcakes.

A 38

tens	ones
1	2
2	6

(C)

4

The class needs to read 50 books. They read 34 books in September and 24 books in October. Have they read at least 50 books?

tens	ones
3	4
2	4

(A)

5



(B)

PREVIEW

Please [Sign In](#) or [Sign Up](#) to download the printable version of this worksheet

7



- A 36
- B 13
- C 67
- D 76



(B)

9

Andrew buys pizza for 76 cents. Lemonade costs 20 cents. He only has \$1.00. Does he have enough for the lemonade?

- A yes
- B no

76¢
+ 20¢



(A)

10

Jenn built a tower with 62 blocks. Hector came and added 24 more blocks to the tower. How many blocks are in the tower?

- A 66
- B 46
- C 86
- D 42

tens	ones
6	2
2	4

(C)