



Name _____ Class _____ Date _____


1 Nate cut a pie into thirds. He ate $\frac{2}{3}$.
How much was not eaten?




- A $\frac{3}{1}$ B $\frac{3}{2}$ C $\frac{1}{3}$ D $\frac{1}{2}$

2 One fourth is not shaded.

- A true
B false



3 A dime is $\frac{1}{10}$ of \$1.00.



4 How much is not shaded?



PREVIEW

Please [Sign In](#) or [Sign Up](#) to download the printable version of this worksheet

- A $\frac{1}{4}$ B $\frac{1}{3}$ C $\frac{1}{2}$ D $\frac{1}{8}$

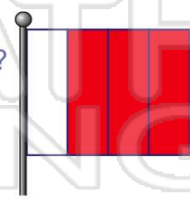
- A $\frac{4}{5}$ B $\frac{1}{4}$ C $\frac{1}{5}$ D $\frac{1}{2}$

9 There are six animals. What part of the group are kittens?



- A $\frac{1}{5}$ B $\frac{1}{6}$ C $\frac{5}{6}$ D $\frac{1}{3}$

10 How much of the flag is not shaded?



- A $\frac{1}{8}$ B $\frac{1}{10}$ C $\frac{1}{4}$ D $\frac{3}{4}$



Name _____ Class _____ Date _____


1 Nate cut a pie into thirds. He ate $\frac{2}{3}$.
How much was not eaten?



- A $\frac{3}{1}$ B $\frac{3}{2}$ C $\frac{1}{3}$ D $\frac{1}{2}$

(C)


2 One fourth is not shaded.



- A true
B false

(A)

3 A dime is $\frac{1}{10}$ of \$1.00.



(A)

4 How much is not shaded?



(B)

5



(A)

PREVIEW

Please [Sign In](#) or [Sign Up](#) to download the printable version of this worksheet

7

- A $\frac{1}{4}$ B $\frac{1}{3}$ C $\frac{1}{2}$ D $\frac{1}{8}$

- A $\frac{4}{5}$ B $\frac{1}{4}$ C $\frac{1}{5}$ D $\frac{1}{2}$

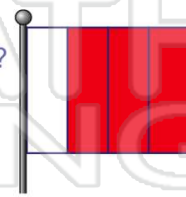
9 There are six animals. What part of the group are kittens?



(B)

- A $\frac{1}{5}$ B $\frac{1}{6}$ C $\frac{5}{6}$ D $\frac{1}{3}$

10 How much of the flag is not shaded?



(C)

- A $\frac{1}{8}$ B $\frac{1}{10}$ C $\frac{1}{4}$ D $\frac{3}{4}$