




Fractions and Decimals

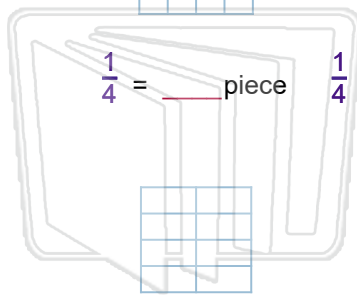
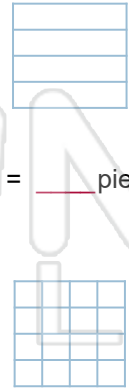
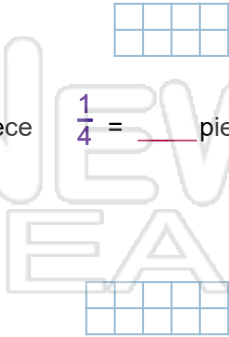


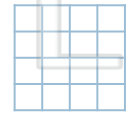



Math

Name _____ Class _____ Date _____

Color $\frac{1}{4}$ of each chocolate bar. How many pieces = $\frac{1}{4}$?











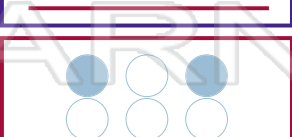
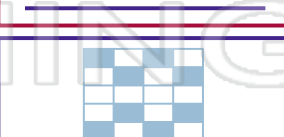
$\frac{1}{4} =$ _____ piece $\frac{1}{4} =$ _____ piece $\frac{1}{4} =$ _____ pieces $\frac{1}{4} =$ _____ pieces $\frac{1}{4} =$ _____ pieces


PREVIEW

Please [Sign In](#) or [Sign Up](#) to download the printable version of this worksheet






ANSWER KEY

Color $\frac{1}{4}$ of each chocolate bar. How many pieces = $\frac{1}{4}$?













$\frac{1}{4} = \underline{1}$ piece
 $\frac{1}{4} = \underline{1}$ piece
 $\frac{1}{4} = \underline{2}$ pieces
 $\frac{1}{4} = \underline{2}$ pieces
 $\frac{1}{4} = \underline{3}$ pieces



PREVIEW

Please [Sign In](#) or [Sign Up](#) to download the printable version of this worksheet



 $\underline{\quad \frac{1}{4} \quad}$	 $\underline{\quad \frac{1}{4} \quad}$	 more than $\frac{1}{4}$
 more than $\frac{1}{4}$	 $\underline{\quad \frac{1}{4} \quad}$	 less than $\frac{1}{4}$
 less than $\frac{1}{4}$	 $\underline{\quad \frac{1}{4} \quad}$	 more than $\frac{1}{4}$