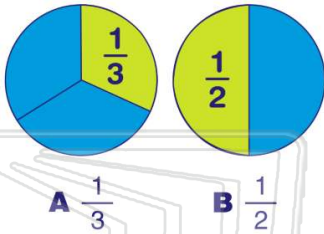




Name _____ Class _____ Date _____

1Which is **more**?**2**

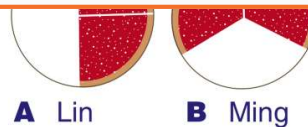
Jane loves cake. She always takes the **larger** piece. Would she take $\frac{2}{3}$ of a cake or $\frac{1}{2}$ of a cake?

A $\frac{2}{3}$ **B** $\frac{1}{2}$ **3****4****5**

PREVIEW

7

Please **Sign In** or **Sign Up** to download the printable version of this worksheet

A $\frac{5}{8}$ **B** $\frac{3}{4}$ **C** $\frac{1}{10}$ **D** $\frac{2}{2}$ **A** Lin **B** Ming**9**

Mark had $\frac{2}{3}$ of his crayons left.
Ken had $\frac{1}{2}$ of his crayons left.
Who had **fewer** crayons left?

**A** Mark **B** Ken**10**

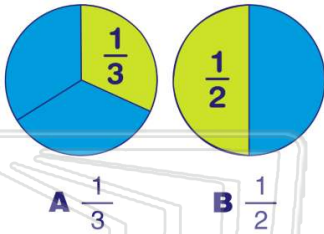
There was $\frac{1}{2}$ of an apple pie and $\frac{1}{5}$ of a sweet potato pie.
Which pie had **more** left?

A apple pie **B** sweet potato pie



Name _____ Class _____ Date _____

- 1 Which is **more**?



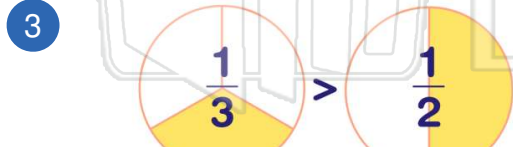
(B)

- 2 Jane loves cake. She always takes the **larger** piece. Would she take $\frac{2}{3}$ of a cake or $\frac{1}{2}$ of a cake?

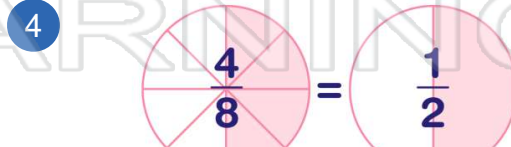
A $\frac{2}{3}$ B $\frac{1}{2}$



(A)



(B)



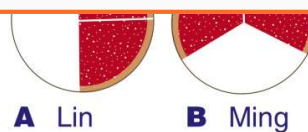
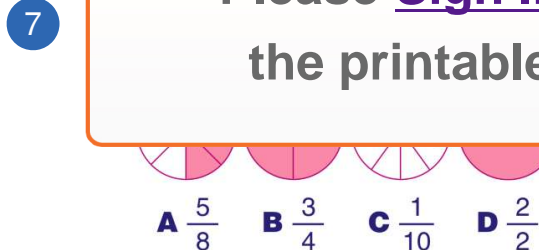
(A)



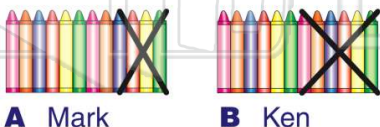
(B)

PREVIEW

Please [Sign In](#) or [Sign Up](#) to download the printable version of this worksheet



- 9 Mark had $\frac{2}{3}$ of his crayons left. Ken had $\frac{1}{2}$ of his crayons left. Who had **fewer** crayons left?



(B)

- 10 There was $\frac{1}{2}$ of an apple pie and $\frac{1}{5}$ of a sweet potato pie. Which pie had **more** left?

A apple pie B sweet potato pie



(A)