



Name \_\_\_\_\_ Class \_\_\_\_\_ Date \_\_\_\_\_

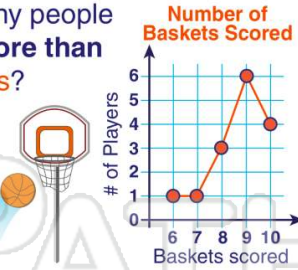
1 How many **more** students came to school on **Tuesday**?

- A 21
- B 17
- C 4
- D  $17 + 21$

Day	# of Students
Monday	#########
Tuesday	############

2 How many people made **more than 7** baskets?

- A 3
- B 6
- C 4
- D 13

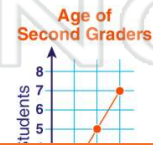


3 **Most** people have **no** pets.

- A true
- B false



4 How many **more** students are **8 years old than 7** years old?



5



## PREVIEW

Please [Sign In](#) or [Sign Up](#) to download the printable version of this worksheet

7



- A 10
- B 5
- C 13
- D 8

- B Log Ride
- C Merry-Go-Round
- D Pirate Ride

9

How many **more** orange leaves than yellow leaves are there?

- A  $8 + 2 =$
- B  $8 - 2 =$
- C  $8 - 6 =$
- D  $2 - 8 =$

Color of Leaves	
red	###
yellow	##
orange	###



10

Ben and Sara saw **more** dogs than squirrels.

- A true
- B false





Name \_\_\_\_\_ Class \_\_\_\_\_ Date \_\_\_\_\_

1 How many **more** students came to school on **Tuesday**?

- A 21
- B 17
- C 4
- D  $17 + 21$

Day	# of Students
Monday	#########
Tuesday	############

(C)

2 How many people made **more than 7** baskets?

- A 3
- B 6
- C 4
- D 13



(D)

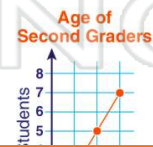
3 **Most** people have **no** pets.

- A true
- B false



(A)

4 How many **more** students are **8 years old than 7 years old**?



(B)

5



(B)

## PREVIEW

Please [Sign In](#) or [Sign Up](#) to download the printable version of this worksheet

7



- A 10
- B 5
- C 13
- D 8

- B Log Ride
- C Merry-Go-Round
- D Pirate Ride

(A)

9 How many **more** orange leaves than yellow leaves are there?

- A  $8 + 2 =$
- B  $8 - 2 =$
- C  $8 - 6 =$
- D  $2 - 8 =$

Color of Leaves	
red	###
yellow	##
orange	###



(B)

10 Ben and Sara saw **more** dogs than squirrels.

- A true
- B false



(B)