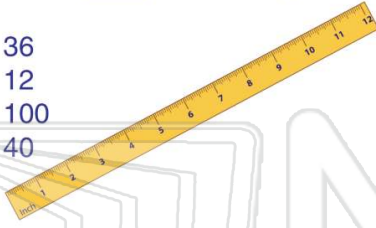




Name _____ Class _____ Date _____

1 A **ruler** is _____ inches long.

- A 36
- B 12
- C 100
- D 40

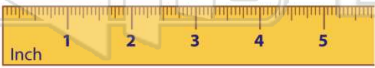


2 A **glue stick** is about how many inches long?

- A 12 inches
- B 10 inches
- C 1 inch
- D 3 inches



3 How **long** is the **line**?



4 How **long** is the **key**?



5



PREVIEW

7

Please [Sign In](#) or [Sign Up](#) to download the printable version of this worksheet

- A 4
- B $5\frac{1}{2}$
- C $4\frac{1}{2}$
- D 3

- B 2 pints
- C 3 pints
- D 4 pints



1 pint = 2 cups

9 How many **cups** are the same as **1 quart**?

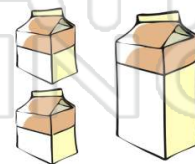
- A 1 cup
- B 2 cups
- C 3 cups
- D 4 cups



2 pints = 1 quart
1 pint = 2 cups

10 Beth's mixing bowl holds 2 quarts. How many **pints** are the same as **2 quarts**?

- A 2 pints
- B 4 pints
- C 6 pints
- D 8 pints



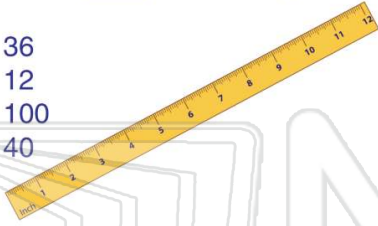
2 pints = 1 quart



Name _____ Class _____ Date _____

1 A **ruler** is _____ inches long.

- A 36
- B 12
- C 100
- D 40



(B)

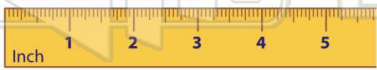
2 A **glue stick** is about how many inches **long**?

- A 12 inches
- B 10 inches
- C 1 inch
- D 3 inches



(D)

3 How **long** is the **line**?



(C)

4 How **long** is the **key**?



(B)

5



(D)

PREVIEW

Please [Sign In](#) or [Sign Up](#) to download the printable version of this worksheet

7

- A 4
- B $5\frac{1}{2}$
- C $4\frac{1}{2}$
- D 3

- B 2 pints
- C 3 pints
- D 4 pints




1 pint = 2 cups

(C)

9 How many **cups** are the same as **1 quart**?

- A 1 cup
- B 2 cups
- C 3 cups
- D 4 cups

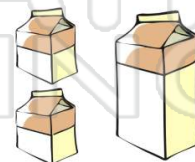


2 pints = 1 quart
1 pint = 2 cups

(D)

10 Beth's mixing bowl holds 2 quarts. How many **pints** are the same as **2 quarts**?

- A 2 pints
- B 4 pints
- C 6 pints
- D 8 pints



2 pints = 1 quart

(B)