



Name _____ Class _____ Date _____

1 You have **24 cents**. You need **40 cents**. How much **more** money do you need?

- A 6 cents
- B 15 cents
- C 14 cents
- D 16 cents



2 How much money will you save if the store **doubles** your coupon?

- A 40 cents
- B 80 cents
- C 20 cents
- D 44 cents



3 You have **5 coins** in your pocket. The **total** of all the coins is **50 cents**. What coins are in your pocket?

- A 4 dimes, 3 nickels

4 How many **nickels** are in \$1.00?

- A 10
- B 20



5



PREVIEW

Please [Sign In](#) or [Sign Up](#) to download the printable version of this worksheet

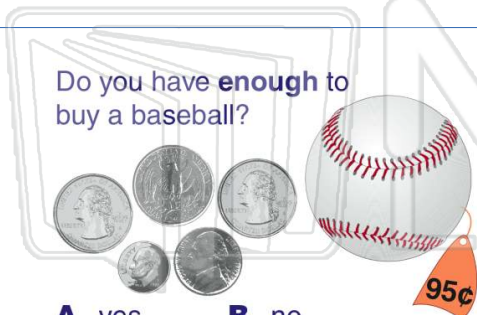
7

- C 1 quarter, 4 dimes
- D 1 quarter, 21 pennies

- B 4 nickels
- C 1 dime, 2 nickels
- D 1 quarter

9 Do you have **enough** to buy a baseball?

- A yes
- B no



10 **45 cents** is equal to:

- A
- B
- C
- D



Name _____ Class _____ Date _____

1 You have **24 cents**. You need **40 cents**. How much **more** money do you need?

A 6 cents
B 15 cents
C 14 cents
D 16 cents



(D)

2 How much money will you save if the store **doubles** your coupon?

A 40 cents
B 80 cents
C 20 cents
D 44 cents



(B)

3 You have **5 coins** in your pocket. The **total** of all the coins is **50 cents**. What coins are in your pocket?

A 4 dimes, 3 nickels

(C)

4 How many **nickels** are in \$1.00?

A 10
B 20



(B)

5



PREVIEW

Please [Sign In](#) or [Sign Up](#) to download the printable version of this worksheet

(A)

7

C 1 quarter, 4 dimes
D 1 quarter, 21 pennies

B 4 nickels
C 1 dime, 2 nickels
D 1 quarter

(A)





9 Do you have **enough** to buy a baseball?



A yes B no

(B)

10 **45 cents** is equal to:

A  C 
B  D 

(D)