



Name _____

Date _____

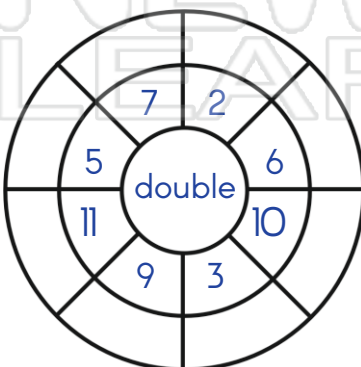
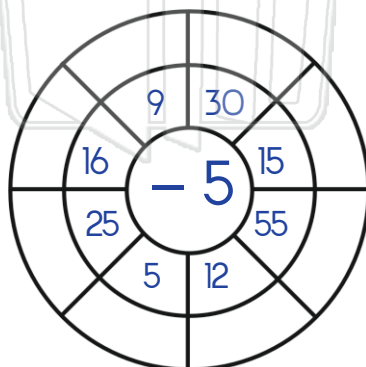
How much money is in each group?



PREVIEW

Please [Sign In](#) or [Sign Up](#) to download the printable version of this worksheet

Show 15 - 7 on this number line. 15 - 7 = _____





- 5 + 7 + 5 + 3 = _____
- 6 + 4 + 4 + 2 = _____
- 3 + 8 + 3 + 2 = _____
- 2 + 9 + 8 + 1 = _____
- 5 + 9 + 1 + 0 = _____
- 2 + 6 + 2 + 4 = _____



Name _____

Date _____

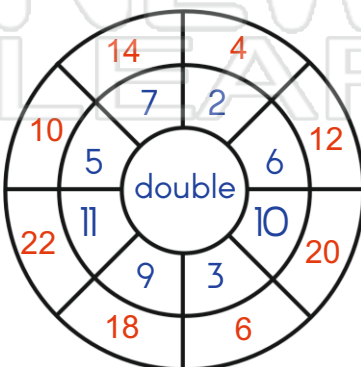
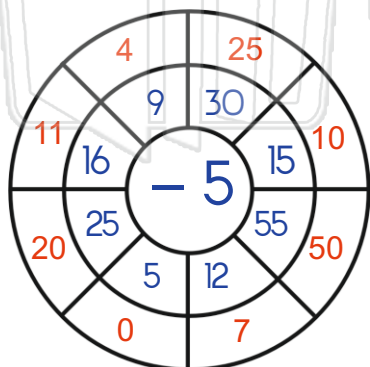
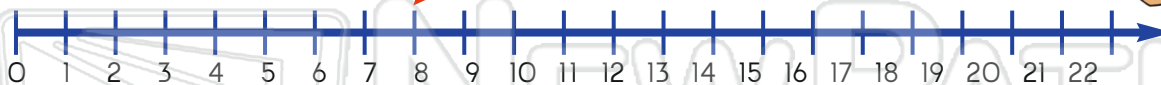
How much money is in each group?



PREVIEW

Please [Sign In](#) or [Sign Up](#) to download the printable version of this worksheet

Show $15 - 7$ on this number line. $15 - 7 = 8$



- $5 + 7 + 5 + 3 = \underline{\quad 20 \quad}$
- $6 + 4 + 4 + 2 = \underline{\quad 16 \quad}$
- $3 + 8 + 3 + 2 = \underline{\quad 16 \quad}$
- $2 + 9 + 8 + 1 = \underline{\quad 20 \quad}$
- $5 + 9 + 1 + 0 = \underline{\quad 15 \quad}$
- $2 + 6 + 2 + 4 = \underline{\quad 14 \quad}$