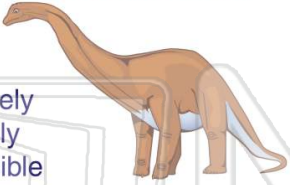




Name \_\_\_\_\_ Class \_\_\_\_\_ Date \_\_\_\_\_

1 How **certain** is it?  
You will see a living dinosaur at the park.



A certain  
B very likely  
C not likely  
D impossible


2 Six cookies are in a bag: 1 chocolate chip, 3 oatmeal, and 2 peanut butter. Without looking, which cookie are you **most likely** to pick out?



A chocolate chip  
B a brownie  
C peanut butter  
D oatmeal

3 There are 3 pizzas: one pepperoni, one cheese, and one mushroom. Someone gives you a piece. Which kind of pizza is it **most likely** to be?

4 How **certain** is it?  
A snake will walk.



A certain

5



## PREVIEW

Please [Sign In](#) or [Sign Up](#) to download the printable version of this worksheet

6 brown or black?




A brown  
B black

A peach C apple  
B plum D pear



9 Where is the spinner **least likely** to land?



A shaded part  
B not shaded part

10 There are 12 kids in a class: 8 boys, 4 girls. Without choosing, are you **more likely** to sit near a boy or a girl?

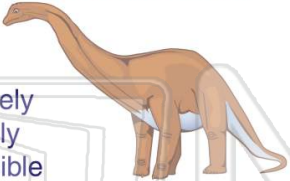


A girl  
B boy




Name \_\_\_\_\_ Class \_\_\_\_\_ Date \_\_\_\_\_

1 How **certain** is it?  
You will see a living dinosaur at the park.



A certain  
B very likely  
C not likely  
D impossible


2 Six cookies are in a bag: 1 chocolate chip, 3 oatmeal, and 2 peanut butter. Without looking, which cookie are you **most likely** to pick out?



A chocolate chip  
B a brownie  
C peanut butter  
D oatmeal

3 There are 3 pizzas: one pepperoni, one cheese, and one mushroom. Someone gives you a piece. Which kind of pizza is it **most likely** to be?

4 How **certain** is it?  
A snake will walk.



A certain

5



**PREVIEW**

Please [Sign In](#) or [Sign Up](#) to download the printable version of this worksheet

7

brown or black?




A brown  
B black

A peach C apple  
B plum D pear




9 Where is the spinner **least likely** to land?



A shaded part  
B not shaded part

10 There are 12 kids in a class: 8 boys, 4 girls. Without choosing, are you **more likely** to sit near a boy or a girl?



A girl  
B boy