



Name _____ Class _____ Date _____

List five events that are certain to happen today.

1. _____
2. _____
3. _____
4. _____
5. _____

Write all the possible outcomes for these events.

- Tossing a coin _____
- Tossing 2 coins _____
- Taking an apple from a box of mixed red and green apples _____













PREVIEW

Please [Sign In](#) or [Sign Up](#) to download the printable version of this worksheet

Describe the position of these items.

- teddy bear _____
- horse _____
- skates _____
- trophy _____

Describe the position of these cans of food that are organised in two rows

- | | | | | | |
|---|---|---|---|---|-------------|
|  |  |  |  |  | peas _____ |
| | | | | | soup _____ |
|  |  |  |  |  | juice _____ |
| | | | | | corn _____ |
| | | | | | jam _____ |





Name _____ Class _____ Date _____

ANSWER KEY

List five events that are certain to happen today.

1. _____
2. _____
3. _____
4. _____
5. _____

Write all the possible outcomes for these events.

Tossing a coin _____ Head or tail

Tossing 2 coins _____ 2 heads, 2 tails, 1 head and 1 tail

Taking an apple from a box of _____

PREVIEW

Please [Sign In](#) or [Sign Up](#) to download the printable version of this worksheet

On the top shelf, second from the left? _____

Describe the position of these items.

teddy bear _____ In the middle of the top shelf.

horse _____ On the middle shelf at the right hand side.

skates _____ Second from the left on the bottom shelf.

trophy _____ On the top shelf on the left hand side.

Describe the position of these cans of food that are organised in two rows.

peas _____ Second from the right side of the top shelf.

soup _____ In the bottom row on the right hand side.

juice _____ In the bottom row, second from the left.

corn _____ In the middle of the top row.

jam _____ In the bottom row on the left.