





# Skip Counting - Answer Key

Math

Name \_\_\_\_\_ Class \_\_\_\_\_ Date \_\_\_\_\_

1 Complete the pattern.



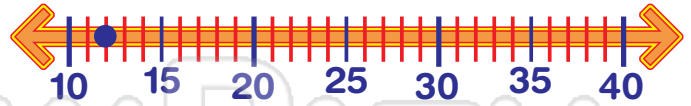
2

Skip count by 5s to 25.

10 15 20 25



6 Start at 12. Count up 10 more. Count up 10 more. Count back 2. What number are you on?



$$12 + 10 + 10 - 2 = 30$$

7 Skip count back by 4.

3




## PREVIEW

Please [Sign In](#) or [Sign Up](#) to download the printable version of this worksheet

4

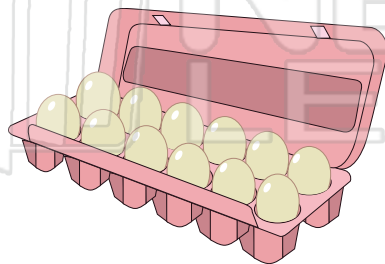


16



5 How many sets of two eggs are there?

6



10 What number are you counting by?

17, 14, 11, 8, 5

3