




Name \_\_\_\_\_ Class \_\_\_\_\_ Date \_\_\_\_\_

1 A **sphere** has no edges.

- A true
- B false



2 How many **faces** are on a **cube**?

- A 4
- B 6
- C 8
- D 3



3 How many **vertices** are on a **rectangular prism**?

- A 4



4 A **cylinder** has \_\_\_\_\_ face(s).

- A 1
- B 0



5



## PREVIEW

Please [Sign In](#) or [Sign Up](#) to download the printable version of this worksheet

7

- C 12
- D 13



- B half
- C no
- D more than one



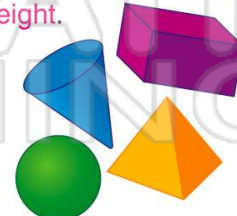
9 What **3D shape** can you make with this pattern?

- A rectangular prism
- B triangular prism
- C cone
- D pyramid



10 Most solid figures have **length**, **width** and **height**.

- A true
- B false





Name \_\_\_\_\_ Class \_\_\_\_\_ Date \_\_\_\_\_

1 A **sphere** has no edges.


- A true
- B false



(A)

2 How many **faces** are on a **cube**?

- A 4
- B 6
- C 8
- D 3



(B)

3 How many **vertices** are on a **rectangular prism**?

- A 4



(D)

4 A **cylinder** has \_\_\_\_\_ face(s).

- A 1
- B 0



(C)

5



(A)

## PREVIEW

Please [Sign In](#) or [Sign Up](#) to download the printable version of this worksheet

7

- C 12
- D 13



- B half
- C no
- D more than one



(B)

9 What **3D shape** can you make with this pattern?

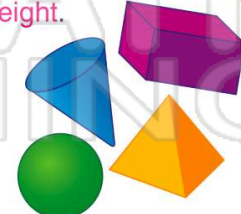
- A rectangular prism
- B triangular prism
- C cone
- D pyramid



(D)

10 Most solid figures have **length**, **width** and **height**.

- A true
- B false



(A)