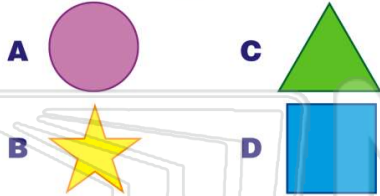


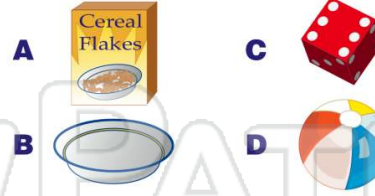


Name _____ Class _____ Date _____

1 Which of these shapes could be the **face** of a **cylinder**?



2 Which of these objects is **shaped like a cube**?



3 I do not roll. I have **5 faces**. One of my faces is a **square**.
What am I?



4 You can stack me. I have **no vertices**. I have **two faces**.
What am I?



5



PREVIEW

Please [Sign In](#) or [Sign Up](#) to download the printable version of this worksheet

7

- A sphere
- B hemisphere
- C cylinder
- D cone



9 Which of these **solids** can be **stacked**?

- A sphere
- B cone
- C cylinder
- D pyramid



10 A **basketball** is shaped like a _____.

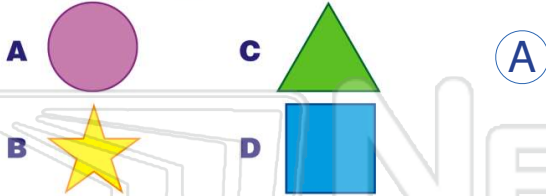
- A cone
- B cylinder
- C cube
- D sphere





Name _____ Class _____ Date _____

1 Which of these shapes could be the **face** of a **cylinder**?



2 Which of these objects is **shaped like a cube**?



3 I do **not** roll. I have **5 faces**. One of my faces is a **square**.
What am I?



4 You can stack me. I have **no vertices**. I have **two faces**.
What am I?



PREVIEW

Please [Sign In](#) or [Sign Up](#) to download the printable version of this worksheet

7

A sphere
B hemisphere
C cylinder
D cone



9 Which of these **solids** can be **stacked**?



10 A **basketball** is shaped like a _____.

