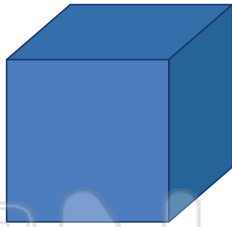


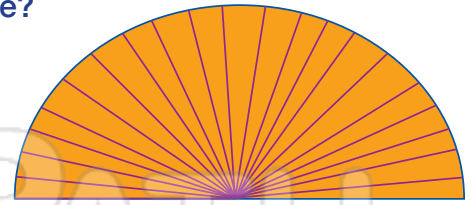


Name _____ Class _____ Date _____

1 How many **faces** are on a **cube**?



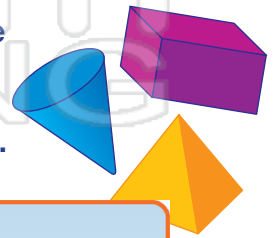
6 What **3D solid** can you make with this shape?



2 A **pyramid** is made up of **triangles** and a _____.



7 Most solid figures have **length, width** and _____.



3 v
o



d like

real
xes

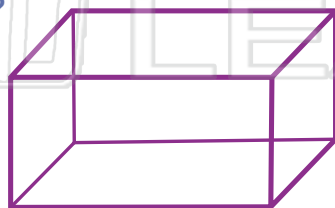
PREVIEW

Please [Sign In](#) or [Sign Up](#) to download the printable version of this worksheet


4 v
y
th

d.

5 How many **vertices** are on a **rectangular prism**?



10 How many **cubes** are in this **block**?





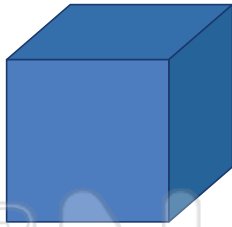
Solids - Answer Key

Math

Name _____ Class _____ Date _____


1 How many **faces** are on a **cube**?

6



6 What **3D solid** can you make with this shape?

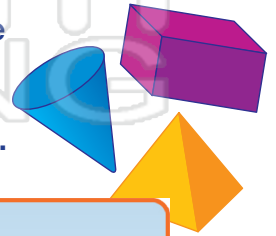
cone



2 A **pyramid** is made up of **triangles** and a **square**.



7 Most solid figures have **length**, **width** and **height**.



3



PREVIEW

Please [Sign In](#) or [Sign Up](#) to download the printable version of this worksheet

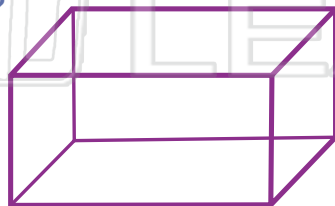
4

rectangular prism



5 How many **vertices** are on a **rectangular prism**?

8



10 How many **cubes** are in this **block**?

12

