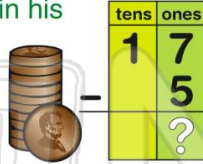




Name _____ Class _____ Date _____

1 Alex had 17 pennies in his pocket. There was a hole in his pocket and 5 pennies fell out. How many pennies were left in his pocket?

- A 17 C 23
B 5 D 12



2 Mina picked 8 daisies. Then she picked 6 roses. She put all the flowers in a vase. There were _____ flowers in the vase.

- A 2 C 14
B 16 D 12



3 Luis' mom said he could play outside until 6:00. He went out to play at 1:00. How long did he play?



4 James invited 20 kids to his birthday party. Thirteen kids came. How many kids did not come?



PREVIEW

Please [Sign In](#) or [Sign Up](#) to download the printable version of this worksheet

7

A 11:30
B 11:00
C 10:30
D 10:00




A 3 hours
B 4 hours
C 1 hour
D 11 hours



9 There were 10 birds on a fence. Three flew away. Then 5 landed on the fence. Now there are 18 birds on the fence.

- A true
B false



10 The football game started at 1:30. The game ended at 4:30. How long was the game?

- A 4 hours
B 1 hour
C 2 hours
D 3 hours





Name _____ Class _____ Date _____

1 Alex had 17 pennies in his pocket. There was a hole in his pocket and 5 pennies fell out. How many pennies were left in his pocket?

- A 17
- B 5
- C 23
- D 12



tens	ones
1	7
	5
	?

(D)

2 Mina picked 8 daisies. Then she picked 6 roses. She put all the flowers in a vase. There were _____ flowers in the vase.

- A 2
- B 16
- C 14
- D 12



(C)

3 Luis' mom said he could play outside until 6:00. He went out to play at 1:00. How long did he play outside?



(C)

4 James invited 20 kids to his birthday party. Thirteen kids came. How many kids did not come?

tens	ones
2	0

(B)



(A)

PREVIEW

Please [Sign In](#) or [Sign Up](#) to download the printable version of this worksheet

7
A 11:30
B 11:00
C 10:30
D 10:00



(B)


A 3 hours
B 4 hours
C 1 hour
D 11 hours



(B)

9 There were 10 birds on a fence. Three flew away. Then 5 landed on the fence. Now there are 18 birds on the fence.

- A true
- B false



(B)

10 The football game started at 1:30. The game ended at 4:30. How long was the game?

- A 4 hours
- B 1 hour
- C 2 hours
- D 3 hours



(D)