



Story Problems


Math

Name _____ Class _____ Date _____

1 Mina picked **8 daisies**. Then she picked **6 roses**. She put all the flowers in a vase. **How many flowers were in the vase?**



6 Sue has **16 gumballs**. She **shares 9 gumballs** with her sister. **How many gumballs does Sue have left?**



2 Luis' mom said he could play outside until **6:00**. He went out to play at **1:00**. **How long did Luis play outside?**



7 There were **11 kittens** in a litter. Some were sold. Now there are **6 kittens**. **How many kittens were sold?**

tens	ones
1	1
-	6
	?



3 J
b
c
n



ave 5
self.
?




4 It
C

PREVIEW

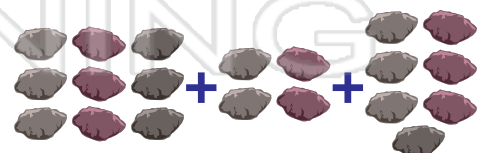
Please [Sign In](#) or [Sign Up](#) to download the printable version of this worksheet



5 There were **10 birds** on a fence. **Three flew away**. Then **5 landed** on the fence. **Now how many birds are on the fence?**



10 Matt found **9 rocks** on Saturday and **4** on Sunday. On Monday Matt found **7 more rocks**. **How many rocks did Matt find in all?**





Story Problems - Answer Key

Math


Name _____ Class _____ Date _____

1 Mina picked **8 daisies**. Then she picked **6 roses**. She put all the flowers in a vase. How many flowers were in the vase?



$$8 + 6 = 14$$

6 Sue has **16 gumballs**. She shares **9 gumballs** with her sister. How many gumballs does Sue have left?



$$16 - 9 = 7$$

2 Luis' mom said he could play outside until **6:00**. He went out to play at **1:00**. How long did Luis play outside?



7 There were **11 kittens** in a litter. Some were sold. Now there are **6 kittens**. How many kittens were sold?


tens	ones
1	1
-	6
	?



3 J
b
c
n



ave 5
self.
?



PREVIEW

Please [Sign In](#) or [Sign Up](#) to download the printable version of this worksheet

4 It
C




6:00



5 There were **10 birds** on a fence. **Three** flew away. Then **5** landed on the fence. Now how many birds are on the fence?

$$10 - 3 + 5 = 12$$



10 Matt found **9 rocks** on Saturday and **4** on Sunday. On Monday Matt found **7 more rocks**. How many rocks did Matt find in all?

$$9 + 4 + 7 = 20$$

