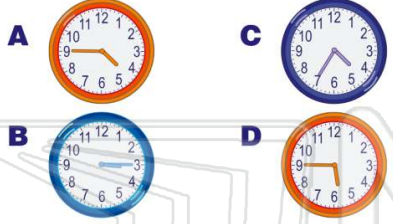




Name \_\_\_\_\_ Class \_\_\_\_\_ Date \_\_\_\_\_

1 Which clock shows **five forty-five**?



2 What will the clock look like a **half hour later**?

- A long hand will be on the three
- B long hand will be on the six
- C short hand will be on the six
- D short hand will be on the twelve



3 The bus picks you up **15 minutes past** eight thirty. **What time does the bus come?**

- A 8:15



4 It is **fifteen minutes later** than the clock shows. **What is the new time?**

- A 8:00



5



## PREVIEW

Please [Sign In](#) or [Sign Up](#) to download the printable version of this worksheet

7

- B 7:45
- C 6:45
- D 7:25



- C 5:30
- D 5:03



9

What **time** is on the clock?

- A 9:00
- B 12:45
- C 12:15
- D 11:45



10

If the cartoon lasts for **thirty minutes** can you make it to the play?



- A yes
- B no



Activity	Time
cartoon	2:45
play	3:30



Name \_\_\_\_\_ Class \_\_\_\_\_ Date \_\_\_\_\_

1 Which clock shows **five forty-five**?

A  C 

B  D 

(D)


2 What will the clock look like a **half hour later**?

A long hand will be on the three

B long hand will be on the six

C short hand will be on the six

D short hand will be on the twelve



(B)

3 The bus picks you up **15 minutes past** eight thirty. **What time does the bus come?**

A 8:15  (B)

4 It is **fifteen minutes later** than the clock shows. **What is the new time?**

A 8:00  (D)

5



## PREVIEW

Please [Sign In](#) or [Sign Up](#) to download the printable version of this worksheet

7

B 7:45


C 6:45

D 7:25



C 5:30

D 5:03



9 What **time** is on the clock?

A 9:00

B 12:45

C 12:15

D 11:45



10 If the cartoon lasts for **thirty minutes** can you make it to the play?

A yes

B no

Activity	Time
cartoon	2:45
play	3:30