


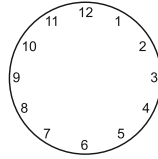


Name \_\_\_\_\_

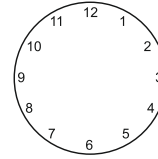
Date \_\_\_\_\_




5 o'clock



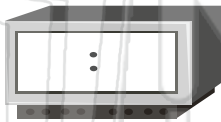
9 o'clock




7 o'clock



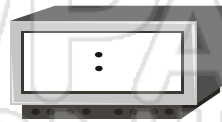
2 o'clock



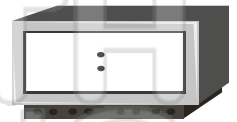
10 o'clock



4 o'clock

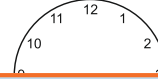


11 o'clock



1 o'clock

Show the time on each



## PREVIEW

Please [Sign In](#) or [Sign Up](#) to download the printable version of this worksheet

Look

1. \_\_\_\_\_

There

2. \_\_\_\_\_

It is c

3. \_\_\_\_\_

It shows what hour it is.

4. \_\_\_\_\_

It is called the minute hand.



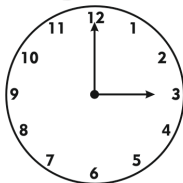
5. \_\_\_\_\_

It shows how many minutes have passed the hour.

6. \_\_\_\_\_

It means it is something o'clock.

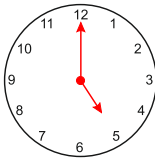
What time is it?



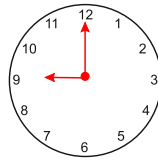


Name \_\_\_\_\_

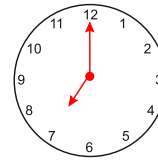
Date \_\_\_\_\_



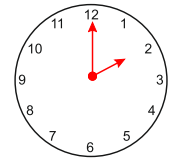
5 o'clock



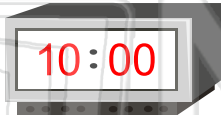
9 o'clock



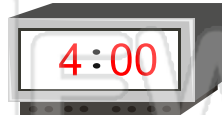
7 o'clock



2 o'clock



10 o'clock



4 o'clock

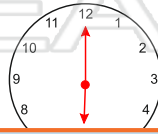
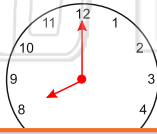


11 o'clock



1 o'clock

Show the time on each clock.



Look

1. H

There

2. V

It is c

3. V

It shd

## PREVIEW

Please [Sign In](#) or [Sign Up](#) to download the printable version of this worksheet

4. What is the longer hand on the clock called?

It is called the minute hand.

5. What does the longer hand show?

It shows how many minutes have passed the hour.

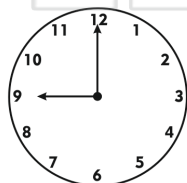
6. What does it mean when the long hand points to the twelve?

It means it is something o'clock.


What time is it?



3 o'clock



9 o'clock



6 o'clock

**YOU NEED:**  
a clock  
a friend

