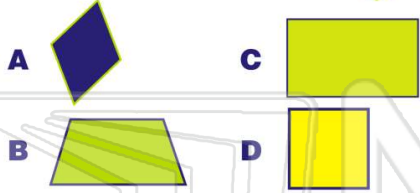


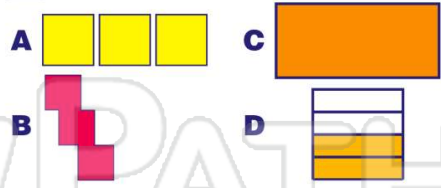


Name \_\_\_\_\_ Class \_\_\_\_\_ Date \_\_\_\_\_

1 \_\_\_\_\_ is congruent with 



2  is congruent with \_\_\_\_\_.



3  is congruent with \_\_\_\_\_.

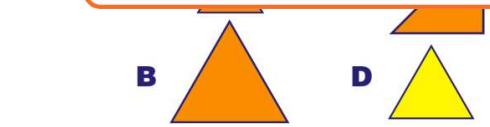


4  is congruent with \_\_\_\_\_.



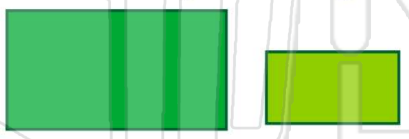
## PREVIEW

Please [Sign In](#) or [Sign Up](#) to download the printable version of this worksheet



C same size and shape  
D opposite shape

9 These two shapes are congruent.



A true  
B false

10 These two shapes are congruent.



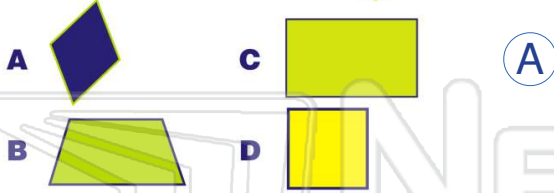


# Congruent Shapes

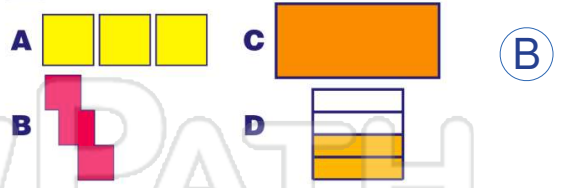
Math

Name \_\_\_\_\_ Class \_\_\_\_\_ Date \_\_\_\_\_

1 \_\_\_\_\_ is congruent with 



2  is congruent with \_\_\_\_\_.



3  is congruent with \_\_\_\_\_.

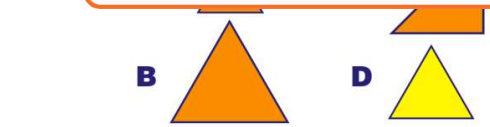


4  is congruent with \_\_\_\_\_.



## PREVIEW

Please [Sign In](#) or [Sign Up](#) to download the printable version of this worksheet



C same size and shape  
D opposite shape

9 These two shapes are congruent.



A true  
B false

10 These two shapes are congruent.



A true  
B false