




Congruent Shapes


Math

Name _____ Class _____ Date _____


1 Which is **congruent** with  ?
Circle it.



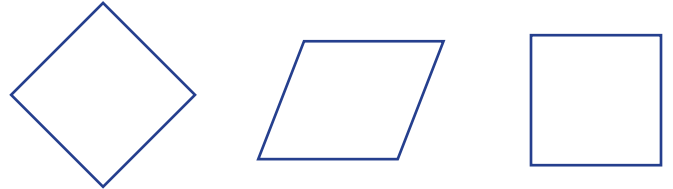
6 Which is **congruent** with  ?
Circle it.



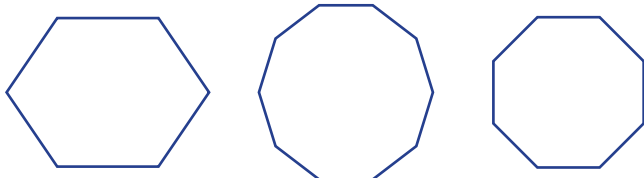
2 Which is **congruent** with  ?
Circle it.



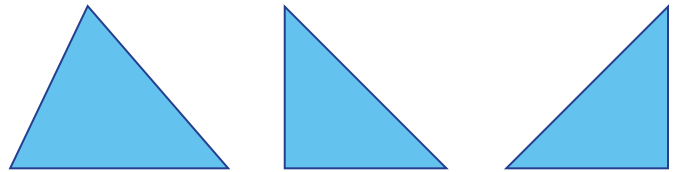
7 Which is **congruent** with  ?
Color it.




3 Which is **congruent** with  ?
Color it.




8 Circle the **two congruent** shapes.



4 Which is **congruent** with  ?
Color it.



9 Circle the **two congruent** shapes.



5 **Congruent shapes** are the **same size**
and _____.

10 Circle the **two congruent** shapes.






Congruent Shapes - Answer Key

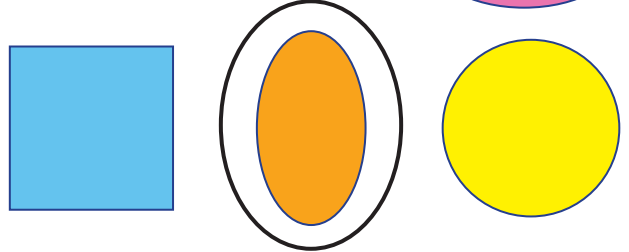
Math

Name _____ Class _____ Date _____


1 Which is **congruent** with  ?
Circle it.




6 Which is **congruent** with  ?
Circle it.



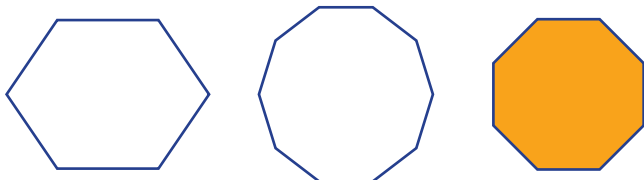
2 Which is **congruent** with  ?
Circle it.



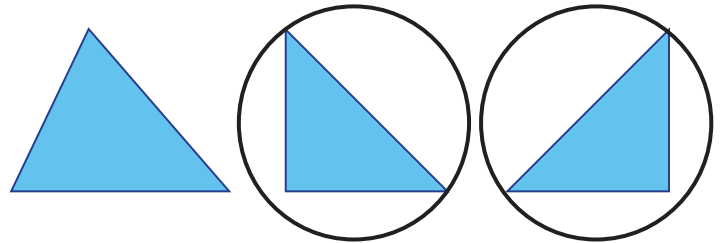
7 Which is **congruent** with  ?
Color it.




3 Which is **congruent** with  ?
Color it.



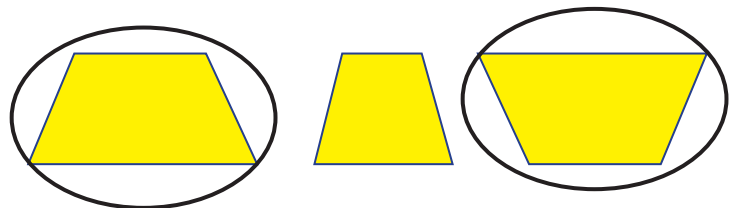
8 Circle the **two congruent** shapes.



4 Which is **congruent** with  ?
Color it.



9 Circle the **two congruent** shapes.



5 **Congruent shapes** are the **same size**
and _____ **shape** _____.

10 Circle the **two congruent** shapes.

