



All About Money

Math

Name _____ Class _____ Date _____

1 Price of sale: **\$.75**
Amount paid: **\$1.00**
Circle the correct change.



2 Circle the amount.



6 Malcolm had **\$1.00** to spend. He found a baseball he wanted for **95 cents**. How **much change** did Malcolm receive when he bought it?



7 Leah and Darcy bought a bag of jacks for **\$.49**. They gave the cashier **\$1.00**. How **much change** did Leah and Darcy get in return?



3



PREVIEW

Please [Sign In](#) or [Sign Up](#) to download the printable version of this worksheet

4




She
ge she
oll.

5 Maggie bought a bag of popcorn at a football game for **\$.30**. She gave the cashier **\$1.00**. What was the **change** Maggie received?

$$\begin{array}{r} 1.00 \\ - .30 \\ \hline \end{array}$$



10 Count the money.






All About Money - Answer Key

Math

Name _____ Class _____ Date _____

1 Price of sale: **\$.75**
Amount paid: **\$1.00**
Circle the correct change.



2 Circle the amount.




6 Malcolm had **\$1.00** to spend. He found a baseball he wanted for **95 cents**. How **much change** did Malcolm receive when he bought it?

5 cents



7 Leah and Darcy bought a bag of jacks for **\$.49**. They gave the cashier **\$1.00**. How **much change** did Leah and Darcy get in return?



3




PREVIEW

Please [Sign In](#) or [Sign Up](#) to download the printable version of this worksheet

4

50 cents



5 Maggie bought a bag of popcorn at a football game for **\$.30**. She gave the cashier **\$1.00**. What was the **change** Maggie received?

$$\begin{array}{r} 1.00 \\ - .30 \\ \hline .70 \end{array}$$



10 Count the money.

31 cents

