



Name _____ Class _____ Date _____

Spacy Sam has a part-time job delivering parcels for the Post Office. He is off to deliver some parcels to his friends. Draw a line to match the name of the shape with each parcel.

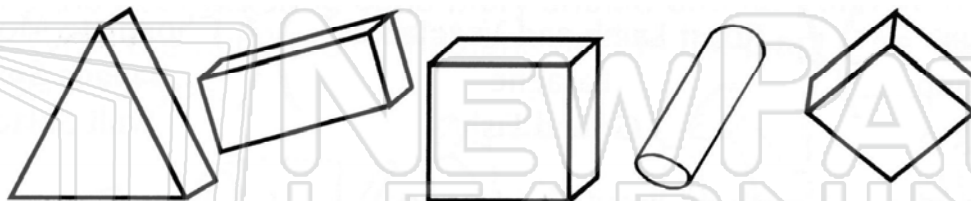
Rectangle

Square

Triangle

Diamond

Cylinder



Spacy Sam gets paid different amounts for each type of parcel. These are the rates:



PREVIEW

Please [Sign In](#) or [Sign Up](#) to download the printable version of this worksheet

Total Pay:

Challenge:

One day Spacy Sam delivered five parcels. Four of the parcels were the same shape and the other one was a cylinder. Altogether he received \$1.15 for that day. What shape were the other parcels?



Name _____ Class _____ Date _____

Spacy Sam has a part-time job delivering parcels for the Post Office. He is off to deliver some parcels to his friends. Draw a line to match the name of the shape with each parcel.

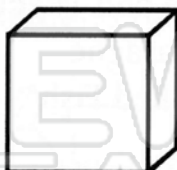
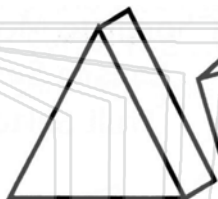
Rectangle

Square


Triangle

Diamond

Cylinder



Spacy Sam gets paid different amounts for each type of parcel. These are the rates:



PREVIEW

Please [Sign In](#) or [Sign Up](#) to download the printable version of this worksheet

\$1.00

\$1.15

\$1.05

\$1.75

85¢

Total Pay: \$5.80

Challenge: Diamond shaped

One day Spacy Sam delivered five parcels. Four of the parcels were the same shape and the other one was a cylinder. Altogether he received \$1.15 for that day. What shape were the other parcels?