



Name _____ Class _____ Date _____

- 1 Which would be the best to use when measuring the **length** of a pencil?
- A feet
 - B inches
 - C yards
 - D pounds



- 2 Which would be the best form of measurement to find the **length** of a football field?
- A yards
 - B miles
 - C inches
 - D feet



- 3 Travis has a large dog. His dog **weighs** 28 _____.
- A grams



- 4 To find the **weight** of a person, _____ would be used.
- A inches



PREVIEW

Please [Sign In](#) or [Sign Up](#) to download the printable version of this worksheet

- 7
- B pounds
 - C gallons
 - D pints



- A feet
- B inches
- C miles
- D yards



- 9 The **length** of a garden hose would be measured in _____.
- A miles
 - B inches
 - C feet
 - D ounces



- 10 To find the **height** of your refrigerator, you would most likely use _____.
- A inches
 - B yards
 - C miles
 - D feet






Name _____ Class _____ Date _____

1 Which would be the best to use when measuring the **length** of a pencil?

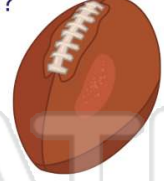
A feet
B inches
C yards
D pounds



(B)

2 Which would be the best form of measurement to find the **length** of a football field?

A yards
B miles
C inches
D feet



(A)

3 Travis has a large dog. His dog **weighs** 28 _____.

A grams



(B)

4 To find the **weight** of a person, _____ would be used.

A inches



(D)

5



(A)

PREVIEW

Please [Sign In](#) or [Sign Up](#) to download the printable version of this worksheet

7

B pounds
C gallons
D pints



(C)


A feet
B inches
C miles
D yards



(C)

9 The **length** of a garden hose would be measured in _____.

A miles
B inches
C feet
D ounces



(C)

10 To find the **height** of your refrigerator, you would most likely use _____.

A inches
B yards
C miles
D feet



(D)