







Name _____ Class _____ Date _____

1 $25 - 16 =$

- A  11
- B  10
- C  9
- D  8

2 $37 - 19 =$

- A  20
- B  19
- C  18
- D  17

3 $28 - 21 =$

- A 7
- B 6

TENS	ONES
2	8

4 $32 - 27 =$

- A 9
- B 8

TENS	ONES
3	2

5



PREVIEW

Please [Sign In](#) or [Sign Up](#) to download the printable version of this worksheet

7

- C 38
- D 39

-	2	9

- C 3
- D 5

-	5	7

9

Which has the answer  17?

- A $59 - 42 =$
- B $59 - 40 =$
- C $59 - 43 =$
- D $59 - 44 =$

TENS	ONES	
5	9	
-	?	?
1	7	

10

Which has the answer 27?

- A $54 - 28 =$
- B $54 - 29 =$
- C $54 - 27 =$
- D $54 - 30 =$

TENS	ONES	
5	4	
-	?	?
2	7	



Name _____ Class _____ Date _____

1 $25 - 16 =$



(C)



2 $37 - 19 =$



(C)



3 $28 - 21 =$

- A 7
- B 6

TENS	ONES
2	8
0	1

(A)

4 $32 - 27 =$

- A 9
- B 8

TENS	ONES
3	2
0	7

(D)

5



(C)

PREVIEW

Please [Sign In](#) or [Sign Up](#) to download the printable version of this worksheet

7

- C 38
- D 39

-	2	9

- C 3
- D 5

-	5	7

(D)

9

Which has the answer ?

- A $59 - 42 =$
- B $59 - 40 =$
- C $59 - 43 =$
- D $59 - 44 =$

TENS	ONES
5	9
-	? ?
1	7

(A)

10

Which has the answer 27?

- A $54 - 28 =$
- B $54 - 29 =$
- C $54 - 27 =$
- D $54 - 30 =$

TENS	ONES
5	4
-	? ?
2	7

(C)