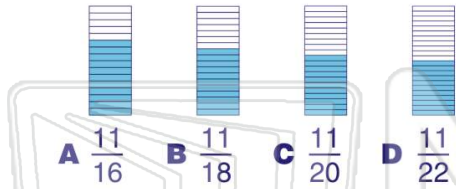


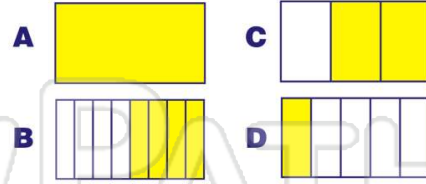


Name _____ Class _____ Date _____

1 Which is **equivalent** to $\frac{1}{2}$?



2 Which rectangle shows $\frac{1}{2}$?



3 This rhombus shows $\frac{1}{2}$.



4 Which is **equivalent** to $\frac{1}{2}$?

5



PREVIEW

Please [Sign In](#) or [Sign Up](#) to download the printable version of this worksheet

7

A $\frac{13}{23}$ B $\frac{13}{24}$ C $\frac{13}{25}$ D $\frac{13}{26}$



9 Which fraction is **equal** to $\frac{1}{2}$?

A $\frac{15}{20}$ B $\frac{15}{25}$ C $\frac{15}{30}$ D $\frac{15}{35}$

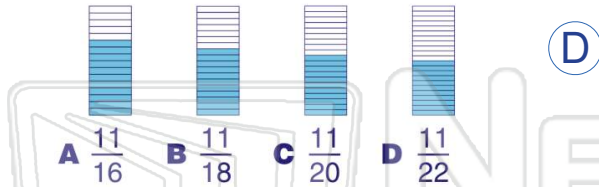
10 This oval shows $\frac{1}{2}$.



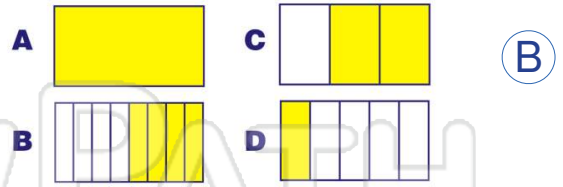


Name _____ Class _____ Date _____

1 Which is **equivalent** to $\frac{1}{2}$?



2 Which rectangle shows $\frac{1}{2}$?



3 This rhombus shows $\frac{1}{2}$.



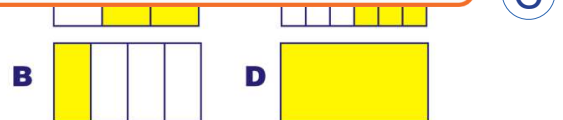
4 Which is **equivalent** to $\frac{1}{2}$?

5

A

7 Please **Sign In** or **Sign Up** to download the printable version of this worksheet

A $\frac{13}{23}$ B $\frac{13}{24}$ C $\frac{13}{25}$ D $\frac{13}{26}$



9 Which fraction is **equal** to $\frac{1}{2}$?

A $\frac{15}{20}$ B $\frac{15}{25}$ C $\frac{15}{30}$ D $\frac{15}{35}$

10 This oval shows $\frac{1}{2}$.

