



Name _____ Class _____ Date _____

1 Three quarters ($\frac{3}{4}$) of the items are **pencils**.

True or false?

- A true
- B false



2 Of the total number of squares, $\frac{4}{9}$ are **shaded**. True or false?

- A true
- B false



3 Of the squares, $\frac{5}{5}$ are **shaded**. True or false?



4 What fraction of the shapes is **diamonds**?



PREVIEW

Please [Sign In](#) or [Sign Up](#) to download the printable version of this worksheet

7 A true
B false



- A $\frac{1}{6}$
- B $\frac{2}{6}$
- C $\frac{3}{6}$
- D $\frac{5}{6}$



9 Five kids are riding their bikes. Three of them are red, two are silver. What fraction shows how many of all the kids' bikes are red?

- A $\frac{2}{3}$
- B $\frac{2}{5}$
- C $\frac{3}{5}$
- D $\frac{3}{2}$

10 There are 4 chocolate chip cookies and 5 peanut butter cookies. What fraction shows how many of all the cookies are chocolate chip?




- A $\frac{4}{9}$
- B $\frac{5}{9}$
- C $\frac{4}{5}$
- D $\frac{9}{4}$




Name _____ Class _____ Date _____

1 Three quarters ($\frac{3}{4}$) of the items are **pencils**.
True or false?
A true
B false




(B)

2 Of the total number of squares, $\frac{4}{9}$ are **shaded**. True or false?
A true
B false



(B)

3 Of the squares, $\frac{5}{5}$ are **shaded**.
True or false?



(A)

4 What fraction of the shapes is **diamonds**?



(C)

5



PREVIEW

Please [Sign In](#) or [Sign Up](#) to download the printable version of this worksheet

(D)


7

A true
B false



(A)

A $\frac{1}{6}$ B $\frac{2}{6}$ C $\frac{3}{6}$ D $\frac{5}{6}$



(A)


9 Five kids are riding their bikes. Three of them are **red**, two are **silver**. What fraction shows how many of all the kids' bikes are **red**?

A $\frac{2}{3}$ B $\frac{2}{5}$ C $\frac{3}{5}$ D $\frac{3}{2}$

(C)

10 There are 4 chocolate chip cookies and 5 peanut butter cookies. What fraction shows how many of all the cookies are **chocolate chip**?

A $\frac{4}{9}$ B $\frac{5}{9}$ C $\frac{4}{5}$ D $\frac{9}{4}$



(A)