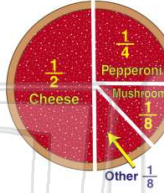




Name \_\_\_\_\_ Class \_\_\_\_\_ Date \_\_\_\_\_

1  $\frac{1}{2}$  of third graders like \_\_\_\_\_ pizza best.

- A pepperoni
- B cheese
- C mushroom
- D other



2 How many books were read in January?

- A 20
- B 25
- C 30
- D 35



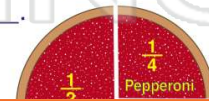
3 Third graders read **more** books in February than in November.

- A true
- B false



4 Only  $\frac{1}{8}$  of the third graders chose \_\_\_\_\_.

- A cheese




## PREVIEW

Please [Sign In](#) or [Sign Up](#) to download the printable version of this worksheet

7

- B 15
- C 20
- D 25

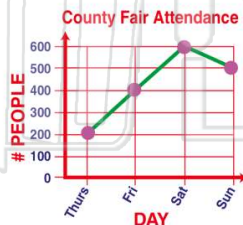


- C 15
- D 25



9 How many attended the fair on Saturday?

- A 200
- B 400
- C 600
- D 800



10 How many **more** miles did Shawna run than Bob?

- A 30
- B 20
- C 10
- D 5





Name \_\_\_\_\_ Class \_\_\_\_\_ Date \_\_\_\_\_

1  $\frac{1}{2}$  of third graders like \_\_\_\_\_ pizza best.

- A pepperoni
- B cheese
- C mushroom
- D other



(B)

2 How many books were read in January?

- A 20
- B 25
- C 30
- D 35



(B)

3 Third graders read **more** books in February than in November.

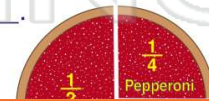
- A true
- B false



(A)

4 Only  $\frac{1}{8}$  of the third graders chose \_\_\_\_\_.

- A cheese



(C)

5



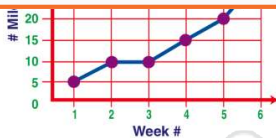
(D)

## PREVIEW

Please [Sign In](#) or [Sign Up](#) to download the printable version of this worksheet

7

- B 15
- C 20
- D 25



- C 15
- D 25

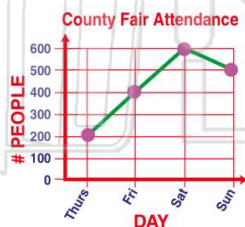


(C)

9

How many attended the fair on Saturday?

- A 200
- B 400
- C 600
- D 800

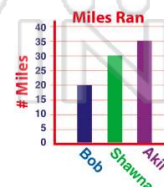


(C)

10

How many **more** miles did Shawna run than Bob?

- A 30
- B 20
- C 10
- D 5



(C)