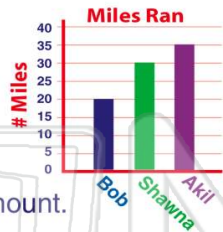




Name _____ Class _____ Date _____

1 Who ran the **most** miles?

- A Bob
- B Shawna
- C Akil
- D They all ran the same amount.



2 How many **fewer** miles did Bob run than Akil?

- A 45
- B 35
- C 25
- D 15



3 How many **fewer** people attended the fair on Thursday than on Sunday?



4 Jake, Erik, and Mathias all collect baseball cards. How many **more** cards does Erik have than Jake?

- A 20
- B 30
- C 40
- D 50

5

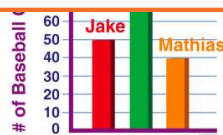


PREVIEW

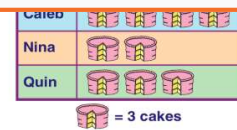
Please [Sign In](#) or [Sign Up](#) to download the printable version of this worksheet

7

- A 40
- B 50
- C 80
- D 170

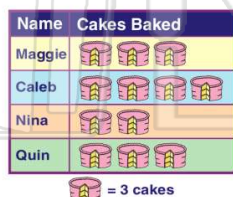


- C 6
- D 12



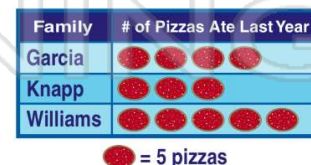
9 Who baked the **most** cakes?

- A Maggie
- B Caleb
- C Nina
- D Quin



10 How many **more** pizzas did the Williams family eat last year than the Garcia family?

- A 1
- B 4
- C 5
- D 10





Name _____ Class _____ Date _____

1 Who ran the **most** miles?

A Bob
B Shawna
C Akil
D They all ran the same amount.

Miles Ran

Name	Miles
Bob	20
Shawna	30
Akil	35

2 How many **fewer** miles did Bob run than Akil?

A 45
B 35
C 25
D 15

Miles Ran

Name	Miles
Bob	20
Shawna	30
Akil	35

3 How many **fewer** people attended the fair on Thursday than on Sunday?

County Fair Attendance

Day	Attendance
Thursday	500
Sunday	600

4 Jake, Erik, and Mathias all collect baseball cards. How many **more** cards does Erik have than Jake?

A 20
B 30
C 40
D 50

Baseball Cards

Name	Number of Cards
Erik	90
Jake	70

5

PREVIEW

Please [Sign In](#) or [Sign Up](#) to download the printable version of this worksheet

7

A 40
B 50
C 80
D 170

of Baseball Cards

Name	Number of Cards
Jake	50
Mathias	40

C 6
D 12

Name	Number of Cakes
Caleb	6
Nina	4
Quin	3

1 cake icon = 3 cakes

9 Who baked the **most** cakes?

A Maggie
B Caleb
C Nina
D Quin

Name	Cakes Baked
Maggie	6
Caleb	4
Nina	3
Quin	3

1 cake icon = 3 cakes

10 How many **more** pizzas did the Williams family eat last year than the Garcia family?

A 1
B 4
C 5
D 10

Family	# of Pizzas Ate Last Year
Garcia	4
Knapp	5
Williams	10

1 pizza icon = 5 pizzas