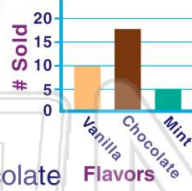




Name _____ Class _____ Date _____

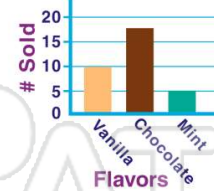
1 The chart shows the most popular flavors of ice cream. **What flavor was sold the least?**

- A vanilla
- B chocolate
- C mint
- D vanilla and chocolate



2 How many students liked **chocolate ice cream** the best?

- A 14
- B 7
- C 17
- D 5



3 How many students are reading **mystery** books?

- A 14
- B 10

= 2 books

Books	# of Students
Mystery	

4 How many **more** students ride bus 2 than bus 4?

- A 5
- B 6

Bus	# of Students
1	32

5



PREVIEW

Please [Sign In](#) or [Sign Up](#) to download the printable version of this worksheet

7

- B 12
- C 2
- D 32

Hamburger	45
Pizza	37
Hot dog	28

- A 5
- B 4
- C 2
- D 15

White Milk	20
Orange Juice	15
Apple Juice	30

9

How many **more** chocolate cookies were sold than **sugar** cookies?

- A 10
- B 15
- C 1
- D 5

Cookie	# Sold
Chocolate Chip	16
Peanut Butter	20
Sugar	15
Chocolate	30

10

For classroom pets, how many **more** fish are there than **lizards**?

- A 8
- B 12
- C 4
- D 5

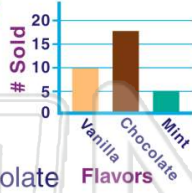
Pet	# Sold
Fish	12
Hamsters	2
Lizards	4



Name _____ Class _____ Date _____

1 The chart shows the most popular flavors of ice cream. **What flavor was sold the least?**

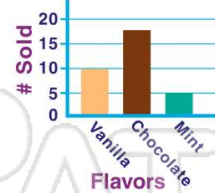
- A vanilla
- B chocolate
- C mint
- D vanilla and chocolate



(C)

2 How many students liked **chocolate ice cream** the best?

- A 14
- B 7
- C 17
- D 5



(C)

3 How many students are reading **mystery** books?

- A 14
- B 10

= 2 books

Books	# of Students
Mystery	

(A)

4 How many **more** students ride bus 2 than bus 4?

- A 5
- B 6

Bus	# of Students
1	32

(C)

5



(B)

PREVIEW

Please [Sign In](#) or [Sign Up](#) to download the printable version of this worksheet

7

- B 12
- C 2
- D 32

Hamburger	45
Pizza	37
Hot dog	28

- A 5
- B 4
- C 2
- D 15

White Milk	20
Orange Juice	15
Apple Juice	30

(B)

9 How many **more** chocolate cookies were sold than **sugar** cookies?

- A 10
- B 15
- C 1
- D 5

Cookie	# Sold
Chocolate Chip	16
Peanut Butter	20
Sugar	15
Chocolate	30

(B)

10 For classroom pets, how many **more** fish are there than **lizards**?

- A 8
- B 12
- C 4
- D 5

Pet	# Sold
Fish	12
Hamsters	2
Lizards	4

(A)