



Name _____ Class _____ Date _____

1 There are 36 _____ in one **yard**.

- A miles
- B inches
- C yards
- D feet



2 There are 12 _____ in one **foot**.

- A inches
- B miles
- C feet
- D yards



3 How **long** is the leaf?

- A 5 miles
- B 5 feet
- C 5 inches



4 How **wide** is the notebook?



5



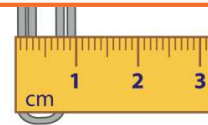
PREVIEW

Please [Sign In](#) or [Sign Up](#) to download the printable version of this worksheet

7


- B 2 gallons
- C They are the same amount.
- D More information is needed.

- B 2 centimeters
- C 3 centimeters
- D 4 centimeters



9 Measure the butterfly's **wingspan**.

- A 3 inches
- B 4 inches
- C 5 inches
- D 6 inches



10 How **long** is this bumblebee?

- A 1 centimeter
- B 2 centimeters
- C 3 centimeters
- D 4 centimeters





Name _____ Class _____ Date _____

1 There are 36 _____ in one yard.

- A miles
- B inches
- C yards
- D feet



(B)

2 There are 12 _____ in one foot.

- A inches
- B miles
- C feet
- D yards



(A)

3 How long is the leaf?

- A 5 miles
- B 5 feet
- C 5 inches



(C)

4 How wide is the notebook?



(D)

5



(C)

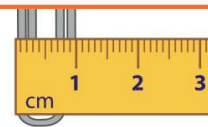
PREVIEW

Please [Sign In](#) or [Sign Up](#) to download the printable version of this worksheet

7

- B 2 gallons
- C They are the same amount.
- D More information is needed.


- B 2 centimeters
- C 3 centimeters
- D 4 centimeters



(A)

9 Measure the butterfly's wingspan.


- A 3 inches
- B 4 inches
- C 5 inches
- D 6 inches



(C)

10 How long is this bumblebee?

- A 1 centimeter
- B 2 centimeters
- C 3 centimeters
- D 4 centimeters



(B)