



Name \_\_\_\_\_ Class \_\_\_\_\_ Date \_\_\_\_\_

1 This key is \_\_\_\_\_ long.

- A 4 centimeters
- B 5 centimeters
- C 6 centimeters
- D 7 centimeters



2 Which is the most?

**1 L = 1,000 mL**

- A 300 mL
- B 6,000 mL
- C 2 L
- D 4 L



3 A cooking pot holds 3 pints. How many cups does the pot hold?

**1 pint = 2 cups**



4 Grace has 4 quarts of orange juice. How many pints of orange juice does Grace have?

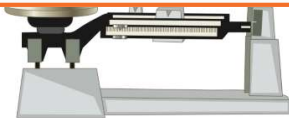
**1 quart = 2 pints**



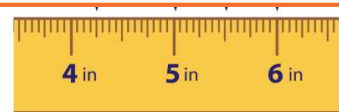
## PREVIEW

Please [Sign In](#) or [Sign Up](#) to download the printable version of this worksheet

- B 50
- C 500
- D 5,000

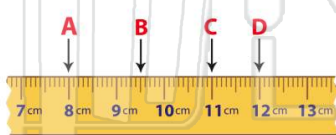


- C C
- D D



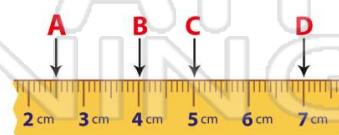
9 Which shows  $9\frac{1}{2}$  centimeters?

- A A
- B B
- C C
- D D



10 Which shows 7 centimeters?

- A A
- B B
- C C
- D D






Name \_\_\_\_\_ Class \_\_\_\_\_ Date \_\_\_\_\_

1 This key is \_\_\_\_\_ long.

A 4 centimeters  
B 5 centimeters  
C 6 centimeters  
D 7 centimeters



(C)


2 Which is the most?  
**1 L = 1,000 mL**

A 300 mL  
B 6,000 mL  
C 2 L  
D 4 L



(B)

3 A cooking pot holds 3 pints. How many cups does the pot hold?  
**1 pint = 2 cups**



(C)

4 Grace has 4 quarts of orange juice. How many pints of orange juice does Grace have?  
**1 quart = 2 pints**



(C)

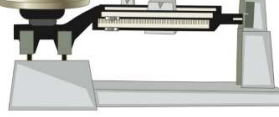


**PREVIEW**

Please [Sign In](#) or [Sign Up](#) to download the printable version of this worksheet


7

B 50  
C 500  
D 5,000



(C)

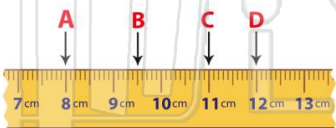
C C  
D D



(C)

9 Which shows  $9\frac{1}{2}$  centimeters?

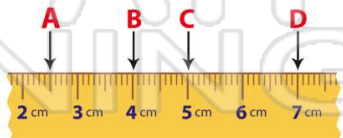
A A  
B B  
C C  
D D



(B)

10 Which shows 7 centimeters?

A A  
B B  
C C  
D D



(D)