




Name _____ Class _____ Date _____

1 Find the **length**.



- A $5\frac{1}{2}$ cm
- B 6 cm
- C $6\frac{1}{2}$ cm
- D 7 cm

2 Which is more, **6 cups** or **3 pints**?

1 pint = 2 cups

- A 6 cups
- B 3 pints
- C They are the same amount.

3 If there are **2 pints in 1 quart**, then how many **pints** are in **5 quarts**?



4 Using the ruler, decide the **length** of the grasshopper, in inches.

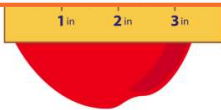
- A $\frac{1}{2}$ inches



PREVIEW

Please [Sign In](#) or [Sign Up](#) to download the printable version of this worksheet

5 C $4\frac{1}{2}$ inches
D 5 inches



- A true
- B false

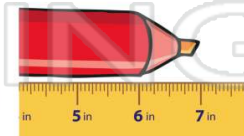
9 Find the **length**.



- A $3\frac{1}{2}$ inches
- B 4 inches
- C $4\frac{1}{2}$ inches
- D 5 inches

10 Using the ruler, decide how **long** the marker is, in inches.


- A $6\frac{1}{2}$ inches
- B 7 inches
- C $7\frac{1}{2}$ inches
- D 8 inches





Name _____ Class _____ Date _____

1 Find the **length**.



A $5\frac{1}{2}$ cm **B** 6 cm
C $6\frac{1}{2}$ cm **D** 7 cm

2 Which is more, **6 cups** or **3 pints**?

1 pint = 2 cups


A 6 cups **B** 3 pints
C They are the same amount.

3 If there are **2 pints** in **1 quart**, then how many **pints** are in **5 quarts**?



4 Using the ruler, decide the **length** of the grasshopper, in inches.

A $\frac{1}{2}$ inches



5



PREVIEW


Please **Sign In** or **Sign Up** to download the printable version of this worksheet

7

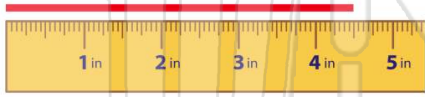
C $4\frac{1}{2}$ inches **D** 5 inches



A true **B** false



9 Find the **length**.



A $3\frac{1}{2}$ inches **B** 4 inches
C $4\frac{1}{2}$ inches **D** 5 inches

10 Using the ruler, decide how **long** the marker is, in inches.

A $6\frac{1}{2}$ inches **B** 7 inches
C $7\frac{1}{2}$ inches **D** 8 inches

