

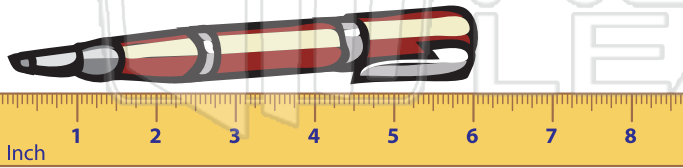


Name \_\_\_\_\_ Class \_\_\_\_\_ Date \_\_\_\_\_

1 There are 12 \_\_\_\_\_ in one foot.

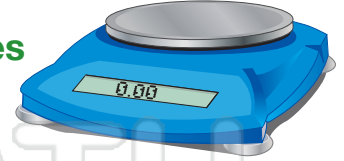


2 This pen is \_\_\_\_\_ inches long.



6 There are 16 ounces in 1 pound. How many ounces are there in 1/2 pound?

\_\_\_\_\_ ounces



7 If a sack of sugar weighs 4,000 grams, how many kilograms is it?

1,000 g = 1 kg



3



## PREVIEW


Please [Sign In](#) or [Sign Up](#) to download the printable version of this worksheet

4



5 Measure the butterfly's wingspan.

\_\_\_\_\_ inches



10 A 2 pound bag of candy contains how many ounces?

1 pound = 16 ounces

2 pounds = \_\_\_\_\_ ounces



