




Name _____

Date _____

How many groups of 2 are here?

Draw circles around the groups of 2.



There are 3 groups of 2.

1 2 3

Circle the groups and write the missing numbers.

_____ groups of 2

_____ groups of 3

_____ groups of 2



PREVIEW

Please [Sign In](#) or [Sign Up](#) to download the printable version of this worksheet



$4 \times 2 = \underline{\quad}$



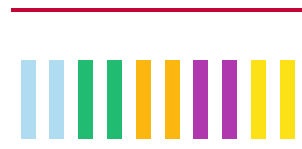


$3 \times \underline{\quad} = \underline{\quad}$





$\underline{\quad} \times \underline{\quad} = \underline{\quad}$






Name _____

Date _____

How many groups of 2 are here? 

Draw circles around the groups of 2.



There are 3 groups of 2.

1 2 3

Circle the groups and write the missing numbers.

4 groups of 2 

2 groups of 3 

5 groups of 2 




PREVIEW

Please [Sign In](#) or [Sign Up](#) to download the printable version of this worksheet



$4 \times 2 = 8$



$3 \times 6 = 18$



$3 \times 3 = 9$



$2 \times 2 = 4$



$4 \times 4 = 16$



$4 \times 5 = 20$



$2 \times 6 = 12$



$2 \times 5 = 10$



$5 \times 2 = 10$