



Name _____

Date _____

Here are **2** rows of fish. There are **4** fish in each row.

2 rows of **4**

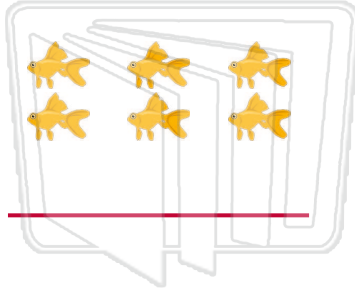
row 1



row 2



Look at the pictures. Write a label for each group.



PREVIEW

Please [Sign In](#) or [Sign Up](#) to download the printable version of this worksheet

Which number has even rows? _____ is an even number.

Which number has odd rows? _____ is an odd number.

Are these numbers odd or even?

5 _____ **8** _____ **4** _____ **7** _____ **11** _____

15 _____ **20** _____ **12** _____ **19** _____ **2** _____

16 _____ **3** _____ **13** _____ **23** _____ **17** _____

10 _____ **1** _____ **18** _____ **30** _____ **14** _____



Name _____

Date _____

Here are **2** rows of fish. There are **4** fish in each row.

2 rows of **4**

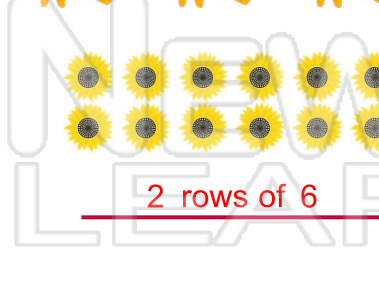
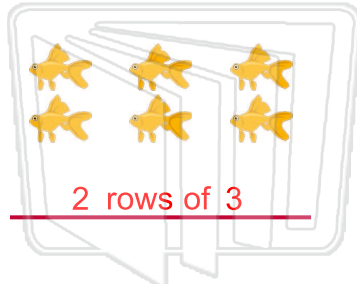
row 1



row 2



Look at the pictures. Write a label for each group.



PREVIEW

Please [Sign In](#) or [Sign Up](#) to download the printable version of this worksheet

Which number has even rows? 6 6 is an even number.

Which number has odd rows? 9 9 is an odd number.

Are these numbers odd or even?

5 odd

8 even

4 even

7 odd

11 odd

15 odd

20 even

12 even

19 odd

2 even

16 even

3 odd

13 odd

23 odd

17 odd

10 even

1 odd

18 even

30 even

14 even