



Multiplication and Division


Math

Name _____ Class _____ Date _____

Put 8 counters into equal rows to make an array. $4 \times 2 = 8$
There are 4 rows of 2 counters.



There are 2 rows of 4 counters. $2 \times 4 = 8$



Make arrays and write multiplication sentences for these.

6
$2 \times \dots = 6$

10
$2 \times \dots = 10$

12
$2 \times \dots = 12$

14
$2 \times \dots = 14$

15

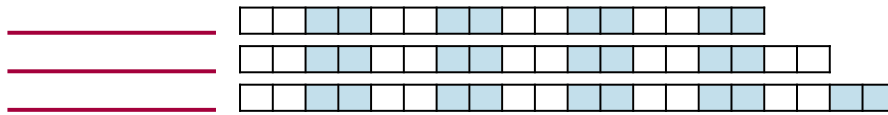
16

18

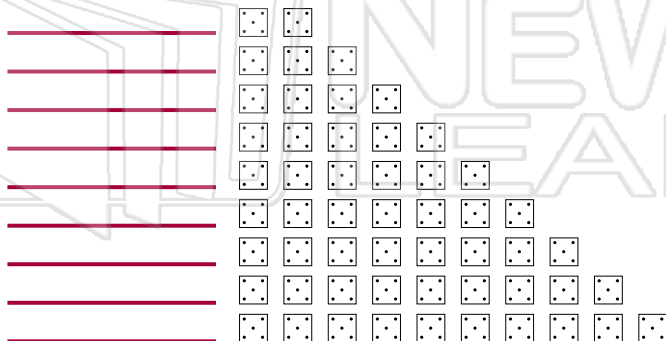
20

PREVIEW

Please [Sign In](#) or [Sign Up](#) to download the printable version of this worksheet



$1 \times 5 = 5$





Multiplication and Division


Math

ANSWER KEY

Put 8 counters into equal rows to make an array. $4 \times 2 = 8$
There are 4 rows of 2 counters.



There are 2 rows of 4 counters. $2 \times 4 = 8$



Make arrays and write multiplication sentences for these.

6

$2 \times 3 = 6$

10

$2 \times 5 = 10$

12

$2 \times 6 = 12$

14

$2 \times 7 = 14$

15

16

18

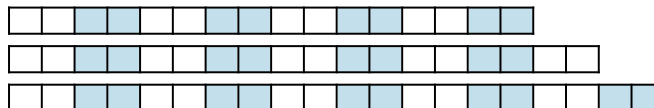
20



PREVIEW

Please [Sign In](#) or [Sign Up](#) to download the printable version of this worksheet

- $8 \times 2 = 16$
- $9 \times 2 = 18$
- $10 \times 2 = 20$



- $1 \times 5 = 5$
- $2 \times 5 = 10$
- $3 \times 5 = 15$
- $4 \times 5 = 20$
- $5 \times 5 = 25$
- $6 \times 5 = 30$
- $7 \times 5 = 35$
- $8 \times 5 = 40$
- $9 \times 5 = 45$
- $10 \times 5 = 50$

