



Multiplication and Division

Math

Name _____ Class _____ Date _____

Share this money fairly!










\$1 between 10 people. Each gets _____	\$1 between 5 people. Each gets _____
\$2 between 4 people. Each gets _____	\$2 between 5 people. Each gets _____
\$5 between 2 people. Each gets _____	\$5 between 10 people. Each gets _____
\$10 between 5 people. Each gets _____	\$10 between 4 people. Each gets _____
\$20 between 4 people. Each gets _____	\$20 between 5 people. Each gets _____



PREVIEW

Please [Sign In](#) or [Sign Up](#) to download the printable version of this worksheet

Share each fruit equally between 5 people.

- 
20 cherries
- 
30 apples
- 
45 oranges
- 
15 bananas
- 
50 plums
- 
25 pears
- 
60 mangoes
- 
90 nectarines
- 
10 kiwi fruit

How many did each person get? Write division number sentences to show how the fruit was shared.

Cherries	Bananas	Mangoes
Apples	Plums	Nectarines
Oranges	Pears	Kiwi fruit



ANSWER KEY

Share this money fairly!










\$1 between 10 people. Each gets <u>10¢</u>	\$1 between 5 people. Each gets <u>20¢</u>
\$2 between 4 people. Each gets <u>50¢</u>	\$2 between 5 people. Each gets <u>40¢</u>
\$5 between 2 people. Each gets <u>\$2.5</u>	\$5 between 10 people. Each gets <u>50¢</u>
\$10 between 5 people. Each gets <u>\$2</u>	\$10 between 4 people. Each gets <u>\$2.5</u>
\$20 between 4 people.	\$20 between 5 people.



PREVIEW

Please [Sign In](#) or [Sign Up](#) to download the printable version of this worksheet

Share each fruit equally between 5 people.

 20 cherries
  30 apples
  45 oranges
  15 bananas
  50 plums
  25 pears
  60 mangoes
  90 nectarines
  10 kiwi fruit

How many did each person get? Write division number sentences to show how the fruit was shared.

Cherries	$20 \div 5 = 4$	Bananas	$15 \div 5 = 3$	Mangoes	$60 \div 5 = 12$
Apples	$30 \div 5 = 6$	Plums	$50 \div 5 = 10$	Nectarines	$90 \div 5 = 18$
Oranges	$45 \div 5 = 9$	Pears	$25 \div 5 = 5$	Kiwi fruit	$10 \div 5 = 2$